


KIT: MATEMATICA 2



Progetto realizzato dalla

Maestra Lauretta

Canale youtube Lapazza pecora

Pagina Facebook «Didattica creativa»

Gruppo Facebook «Didattica a distanza help»

Instagram Didattica Creativa

Twitter – Maestra Lauretta



Didattica Creativa

Fonti e immagini tratte da...

Risorse personali


Power point

<https://icon-icons.com/it/>

Giphy

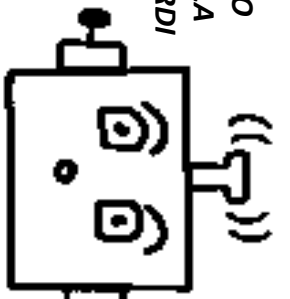
Google

1° QUADERNO DI MATEMATICA 2

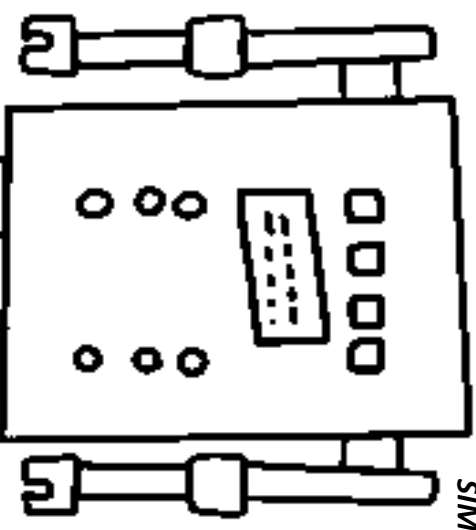


NOME

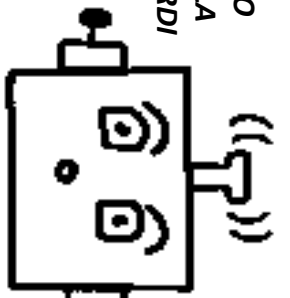
ECCOMI, RITORNO
IN SECONDA BELLA
CARICA... TI RICORDI
DI ME? SONO LA
MATEMATICAI!



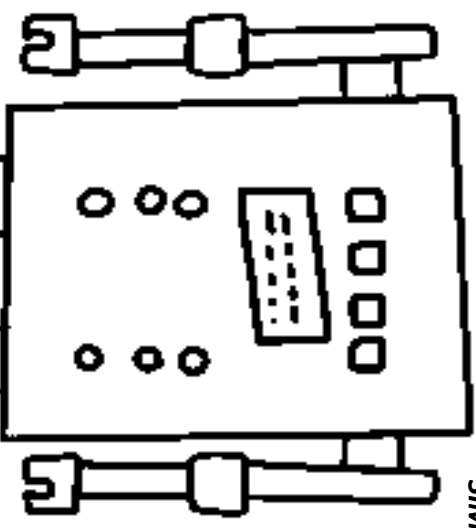
POSSO
SEMBRARE
CERVELLOTICA,
MA BASTA UN
PO' DI LOGICA E
SCOPRIRAI CHE
SONO MOLTO
SIMPATICAI!

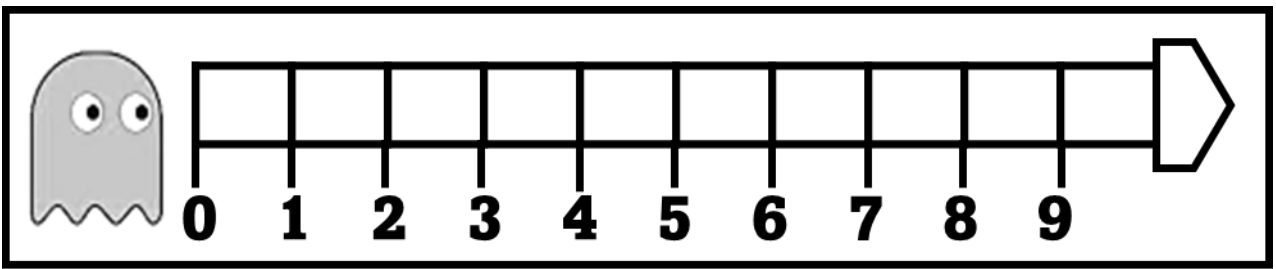
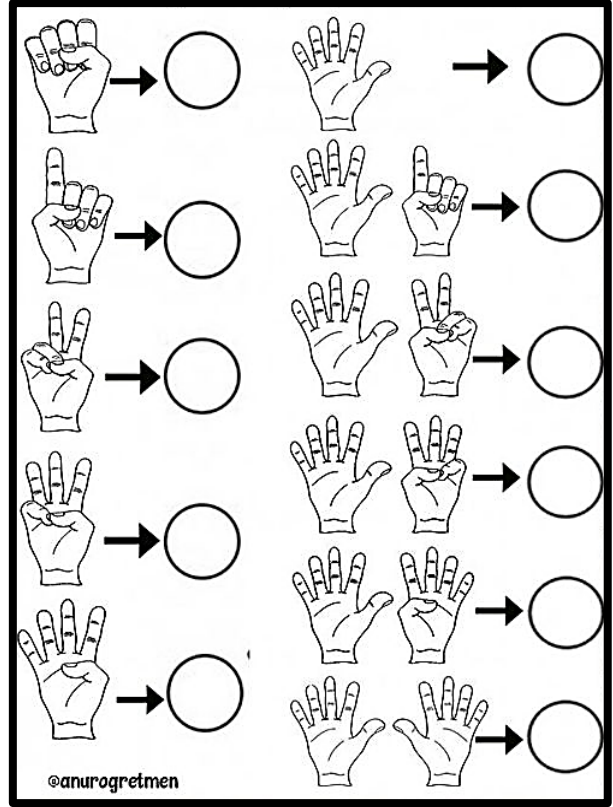
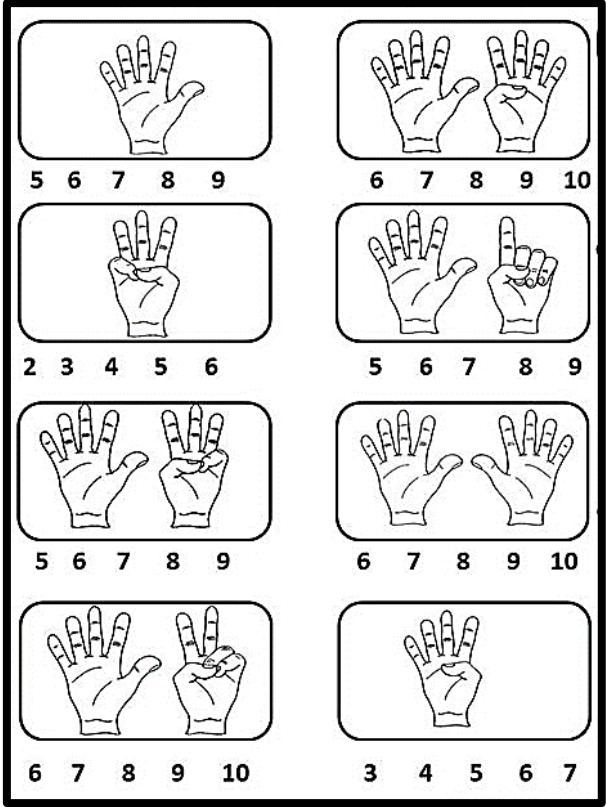


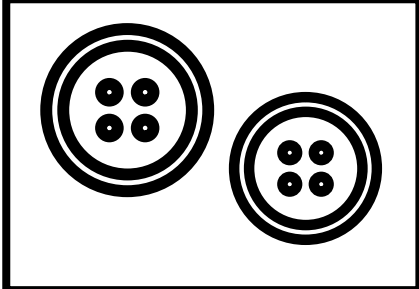



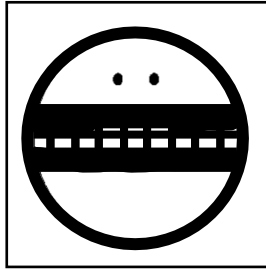







ECCOMI, RITORNO
IN SECONDA BELLA
CARICA... TI RICORDI
DI ME? SONO LA
MATEMATICAI!


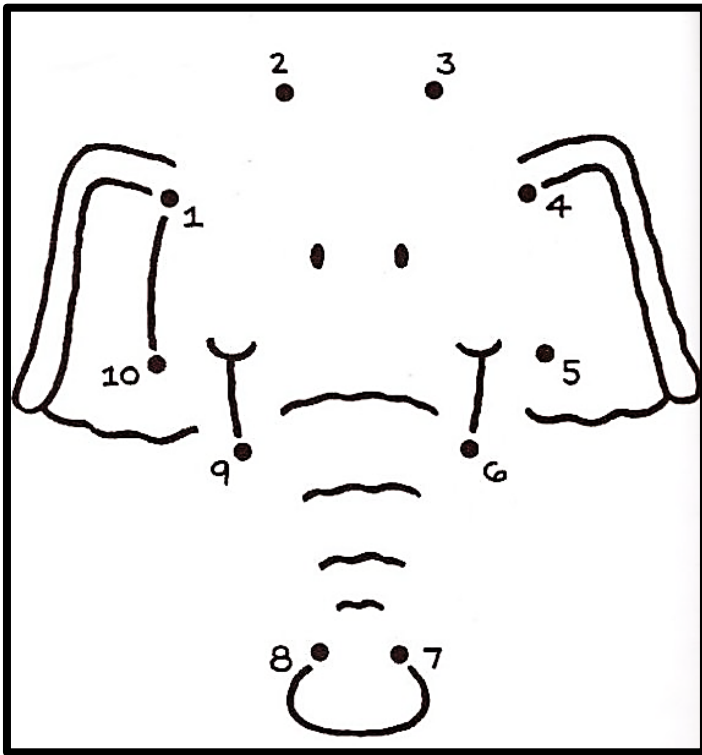
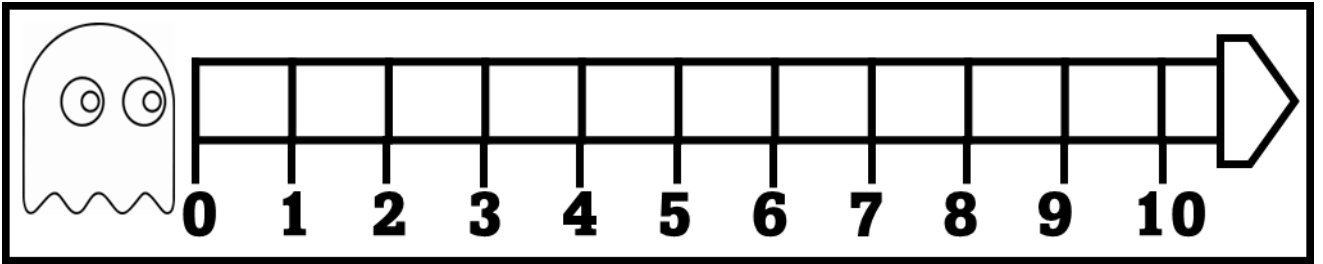





POSSO
SEMBRARE
CERVELLOTICA,
MA BASTA UN
PO' DI LOGICA E
SCOPRIRAI CHE
SONO MOLTO
SIMPATICAI!











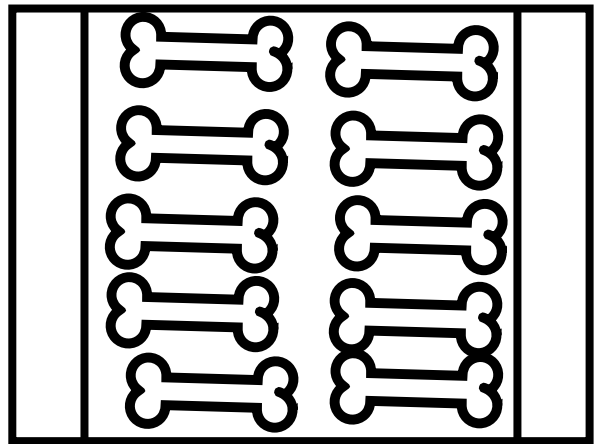





da 	 U
--	---

**DECINE E UNITA'
 SULL'ABACO SONO
 CELEBRITA'...**

da 	 U
---	---

**DECINE E UNITA'
 SULL'ABACO SONO
 CELEBRITA'...**



	da
	u

	da
	u

	da
	u

	da
	u

	da
	u



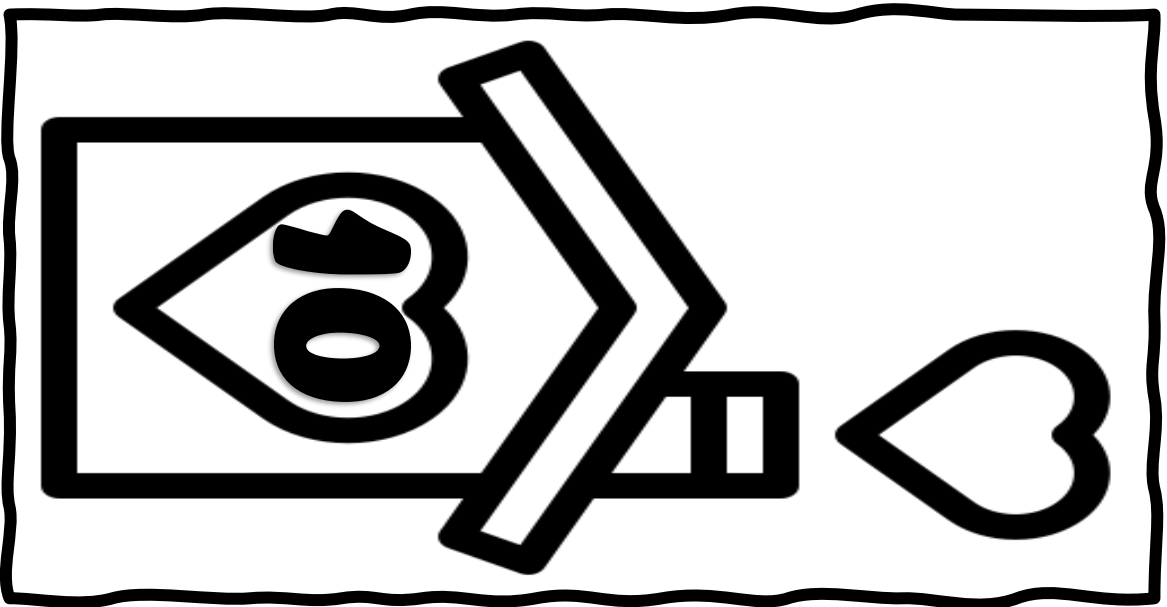
	da
	u




	da
	u




	da
	u

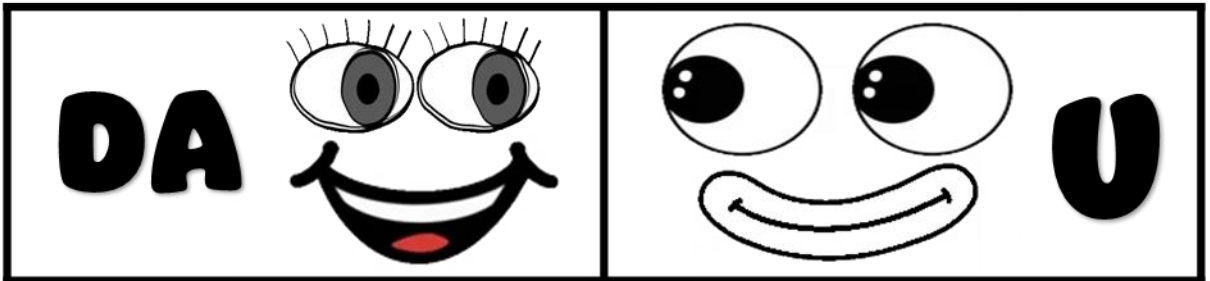




	da
	u

	da
	u






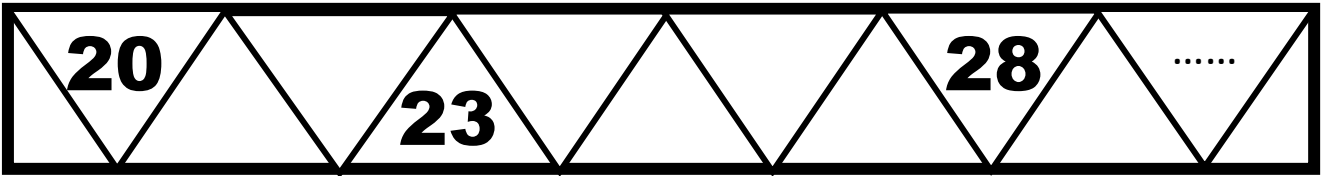
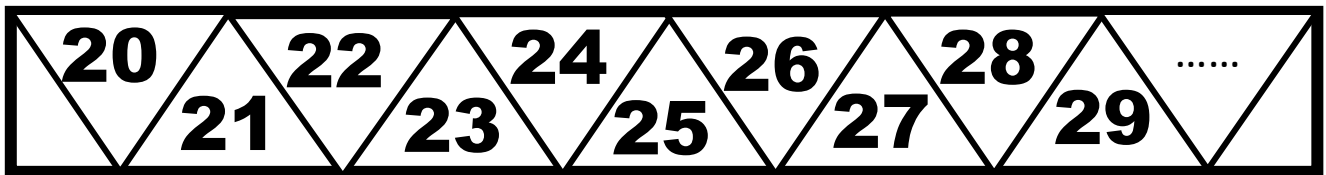











In maiuscolo per i bambini in difficoltà











In maiuscolo per i bambini in difficoltà






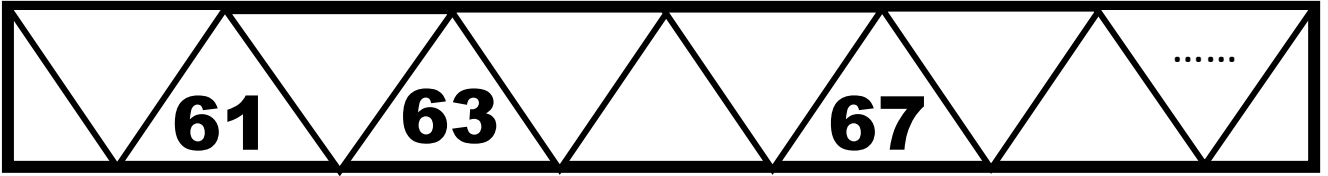

In maiuscolo per i bambini in difficoltà




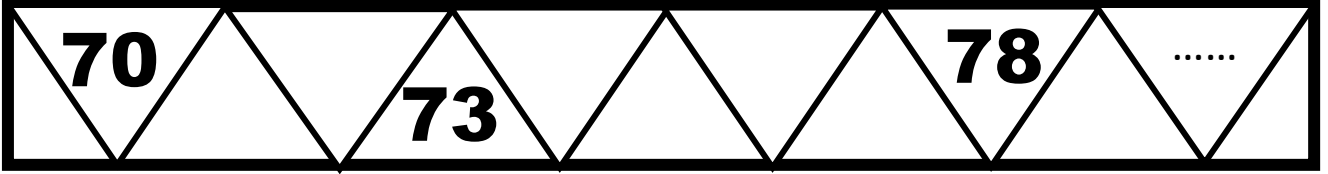






In maiuscolo per i bambini in difficoltà







In maiuscolo per i bambini in difficoltà








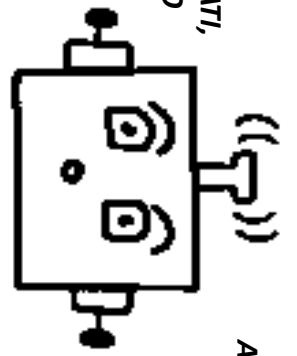


2° QUADERNO DI MATEMATICA 2

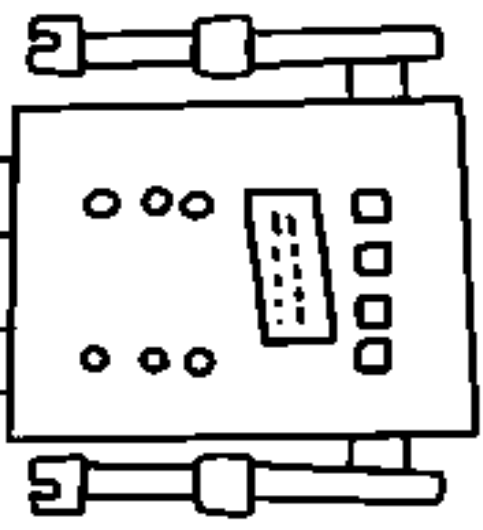


NOME

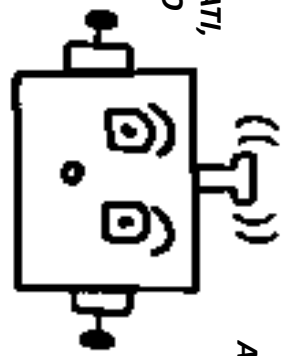
SIAMO TUTTI
BRAVI E PREPARATI,
SE AL SECONDO
STEP SIAMO
ARRIVATI!



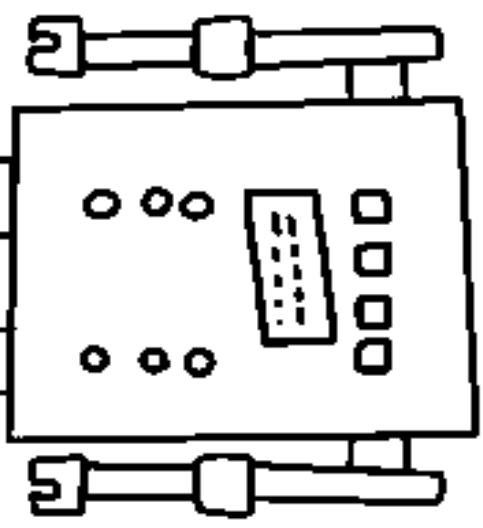
ANDIAMO AVANTI
SENZA FRETTA,
UN'ALTRA META
CI ASPETTAI!




SIAMO TUTTI
BRAVI E PREPARATI,
SE AL SECONDO
STEP SIAMO
ARRIVATI!



ANDIAMO AVANTI
SENZA FRETTA,
UN'ALTRA META
CI ASPETTAI!





0										9
----------	--	--	--	--	--	--	--	--	--	----------

10

19				15					
-----------	--	--	--	-----------	--	--	--	--	--

--

21						27		
-----------	--	--	--	--	--	-----------	--	--

30

			36					
--	--	--	-----------	--	--	--	--	--

40

		43						49	50
--	--	-----------	--	--	--	--	--	-----------	-----------



91			94					
-----------	--	--	-----------	--	--	--	--	--

90

				85				
--	--	--	--	-----------	--	--	--	--

80


			74					
--	--	--	-----------	--	--	--	--	--

70


				65				61
--	--	--	--	-----------	--	--	--	-----------

60



51						57		
-----------	--	--	--	--	--	-----------	--	--

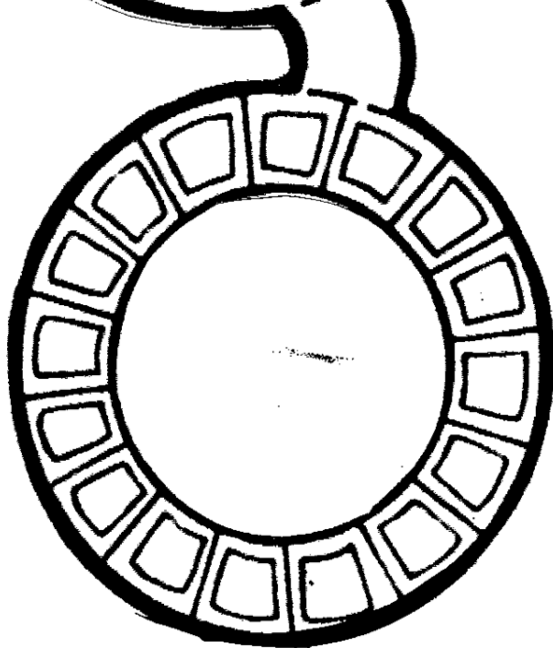



1		3		5		7		9	
11		13		15		17		19	
21		23		25		27		29	
31		33		35		37		39	
41		43		45		47		49	
51		53		55		57		59	
61		63		65		67		69	
71		73		75		77		79	
81		83		85		87		89	
91		93		95		97		99	

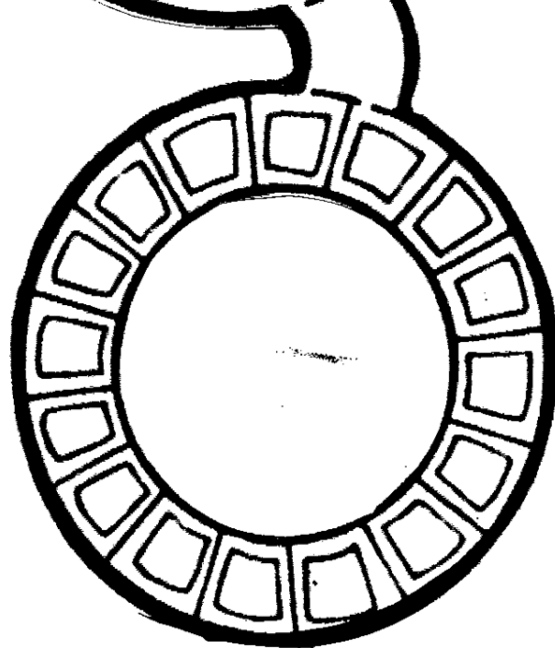



1		3		5		7		9	
11		13		15		17		19	
21		23		25		27		29	
31		33		35		37		39	
41		43		45		47		49	
51		53		55		57		59	
61		63		65		67		69	
71		73		75		77		79	
81		83		85		87		89	
91		93		95		97		99	





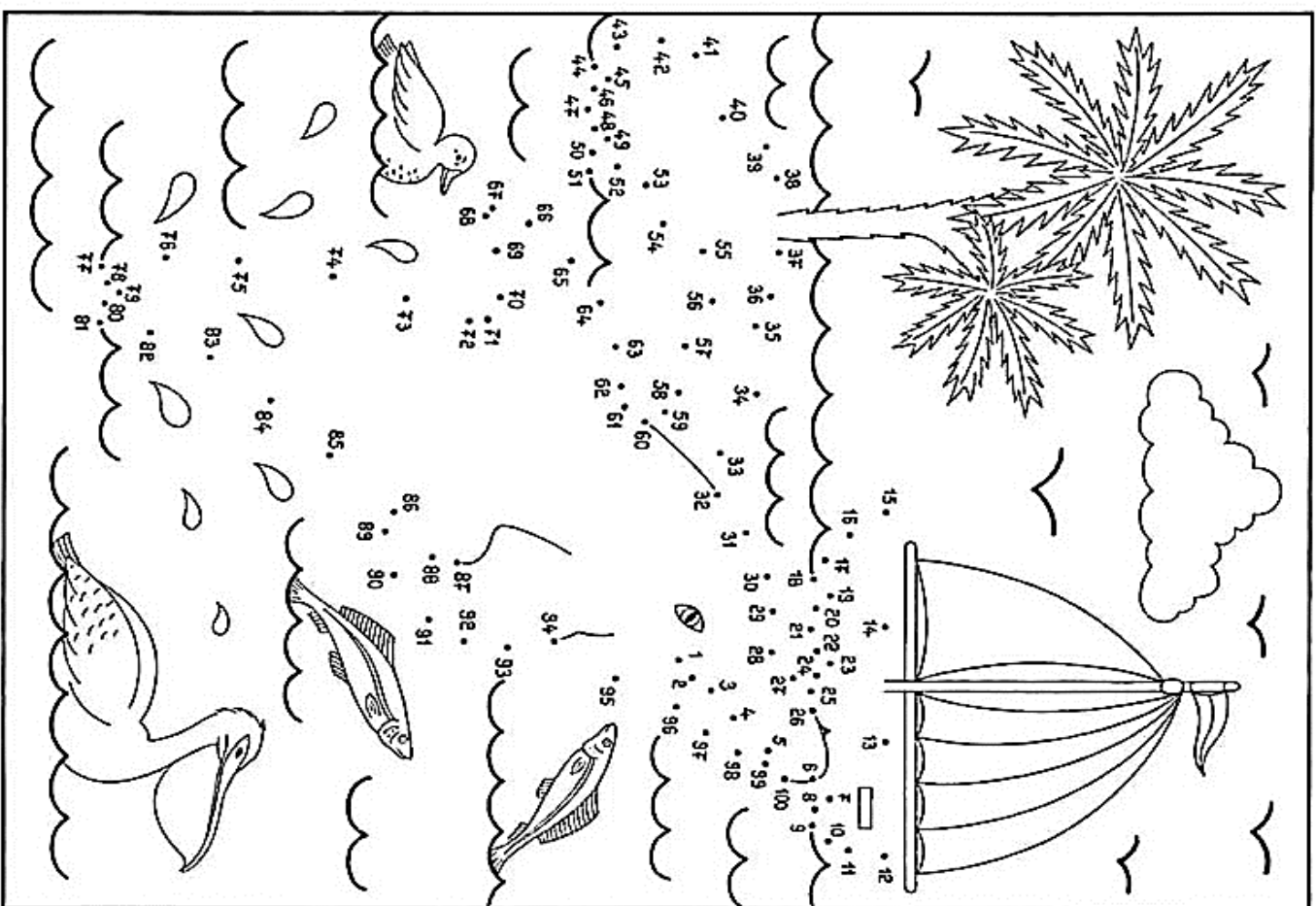
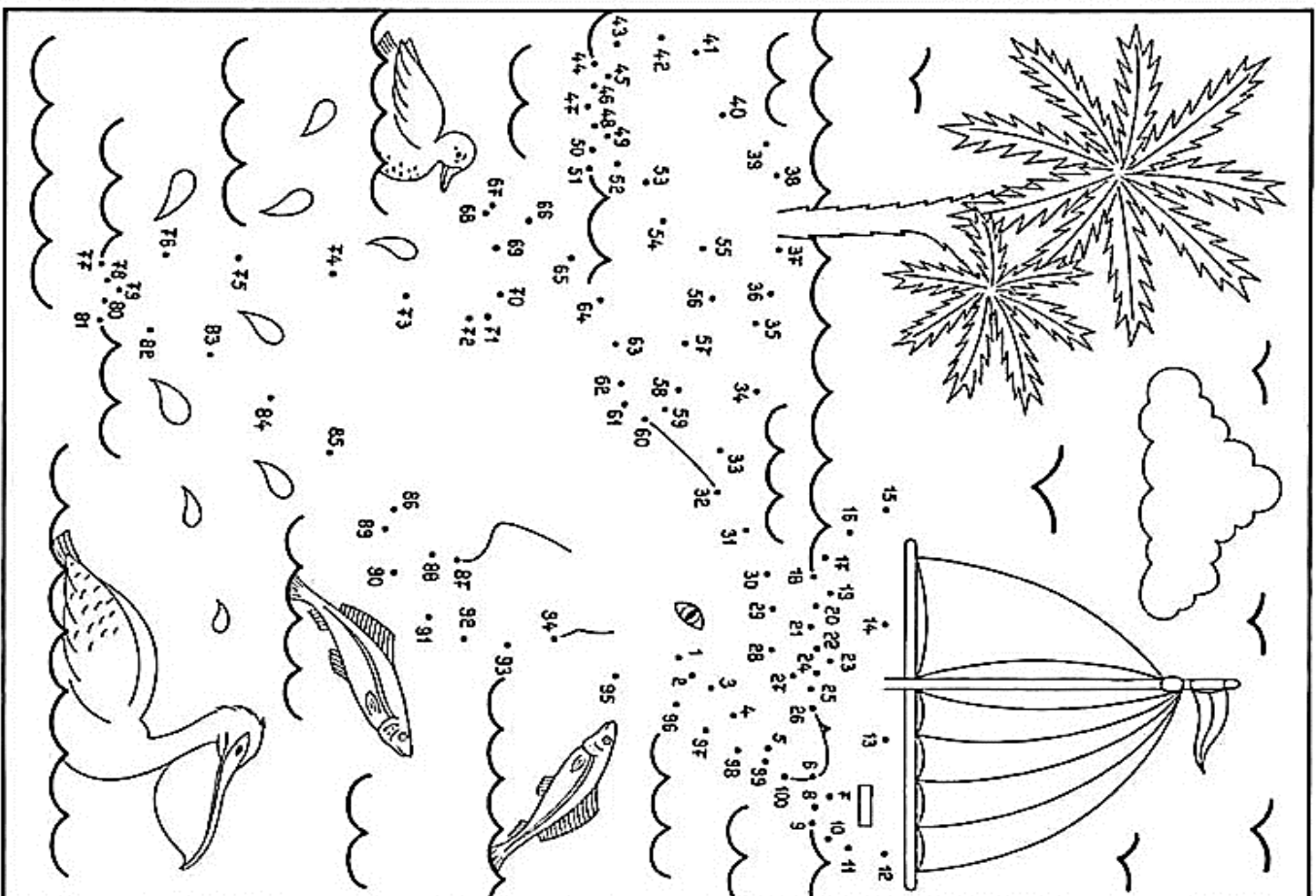
**...E QUANDO ARRIVA
IL NUMERO CENTO,
E' UN GRANDE
EVENTO!**



**...E QUANDO ARRIVA
IL NUMERO CENTO,
E' UN GRANDE
EVENTO!**

IN LETTERE	CIFRE	CENTINAIA h	DECINE da	UNITA' u
CENTOSEI	106			
CENTOSIEDICI				
CENTOVENTITRE				
CENTOTRENTAQUATTRO				
CENTOQUARANTADUE				
CENTOCINQUANTASETTE				
CENTOSESSANTOTTO				
CENTOSETTANTASEI				
CENTOTTANTANOVE				
CENTONOVANTACINQUE				

IN LETTERE	CIFRE	CENTINAIA h	DECINE da	UNITA' u
CENTOSEI	106			
CENTOSIEDICI				
CENTOVENTITRE				
CENTOTRENTAQUATTRO				
CENTOQUARANTADUE				
CENTOCINQUANTASETTE				
CENTOSESSANTOTTO				
CENTOSETTANTASEI				
CENTOTTANTANOVE				
CENTONOVANTACINQUE				



100



200



300



400



500



600



700






800



900





$$3 + 9 =$$

$$3 + 7 + 2 =$$

$$10 + 2 = 12.$$

$$9 + 6 =$$

$$+ + =$$

$$+ + =$$

$$5 + 8 =$$

$$+ + =$$

$$+ + =$$

$$6 + 8 =$$

$$+ + =$$

$$+ + =$$

$$8 + 4 =$$

$$+ + =$$

$$+ + =$$

$$5 + 9 =$$

$$+ + =$$

$$+ + =$$

$$3 + 9 =$$

$$3 + 7 + 2 =$$

$$10 + 2 = 12.$$

$$9 + 6 =$$

$$+ + =$$

$$+ + =$$

$$5 + 8 =$$

$$+ + =$$

$$+ + =$$

$$6 + 8 =$$

$$+ + =$$

$$+ + =$$

$$8 + 4 =$$

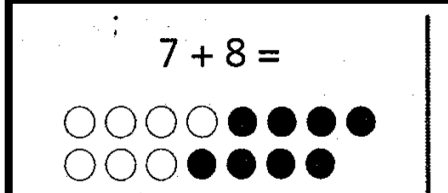
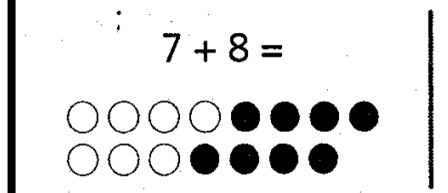
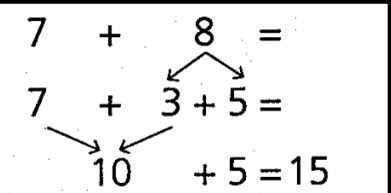

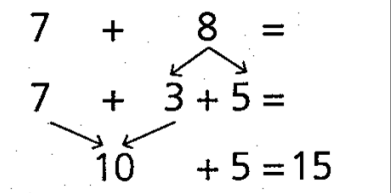
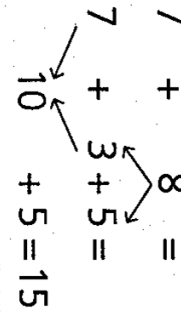

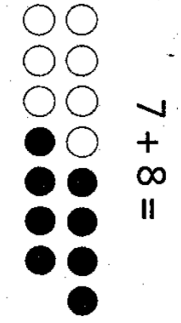
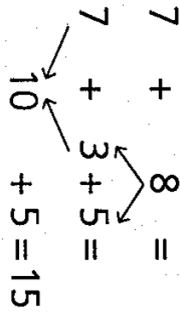
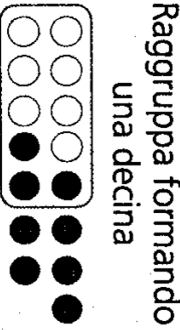

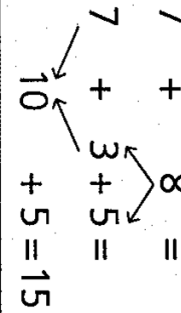


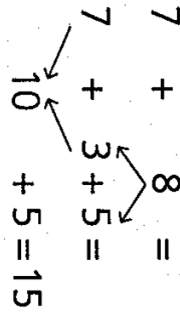
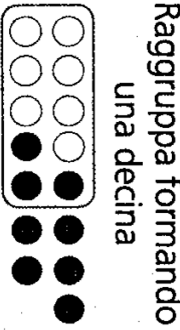

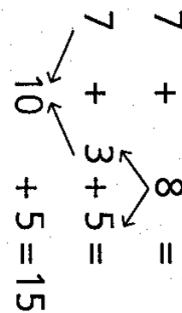
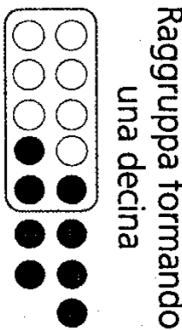
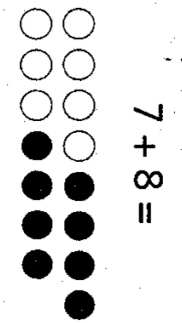
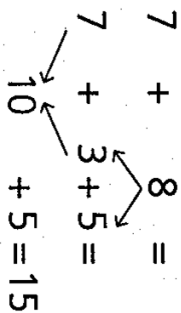
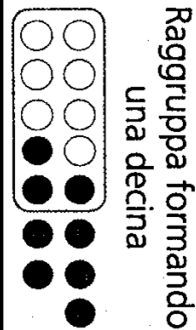
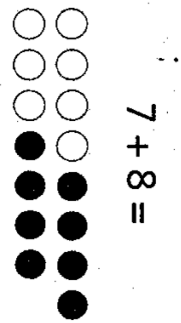
$$+ + =$$

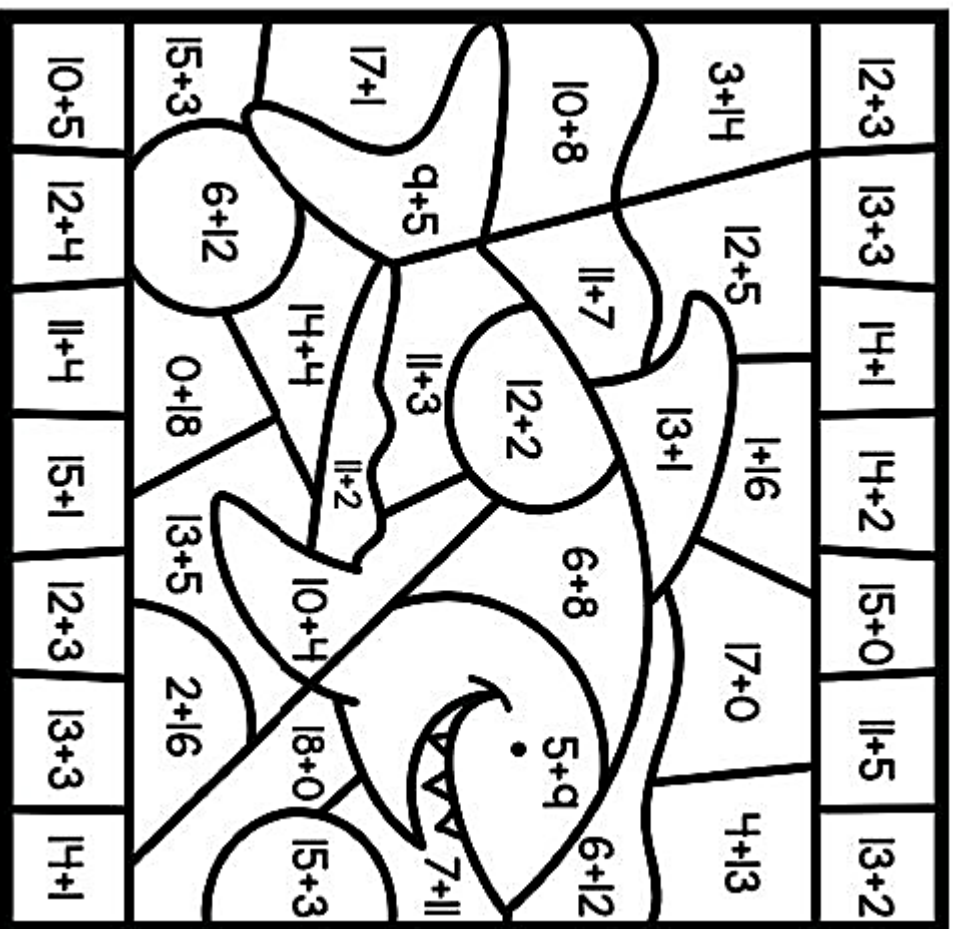
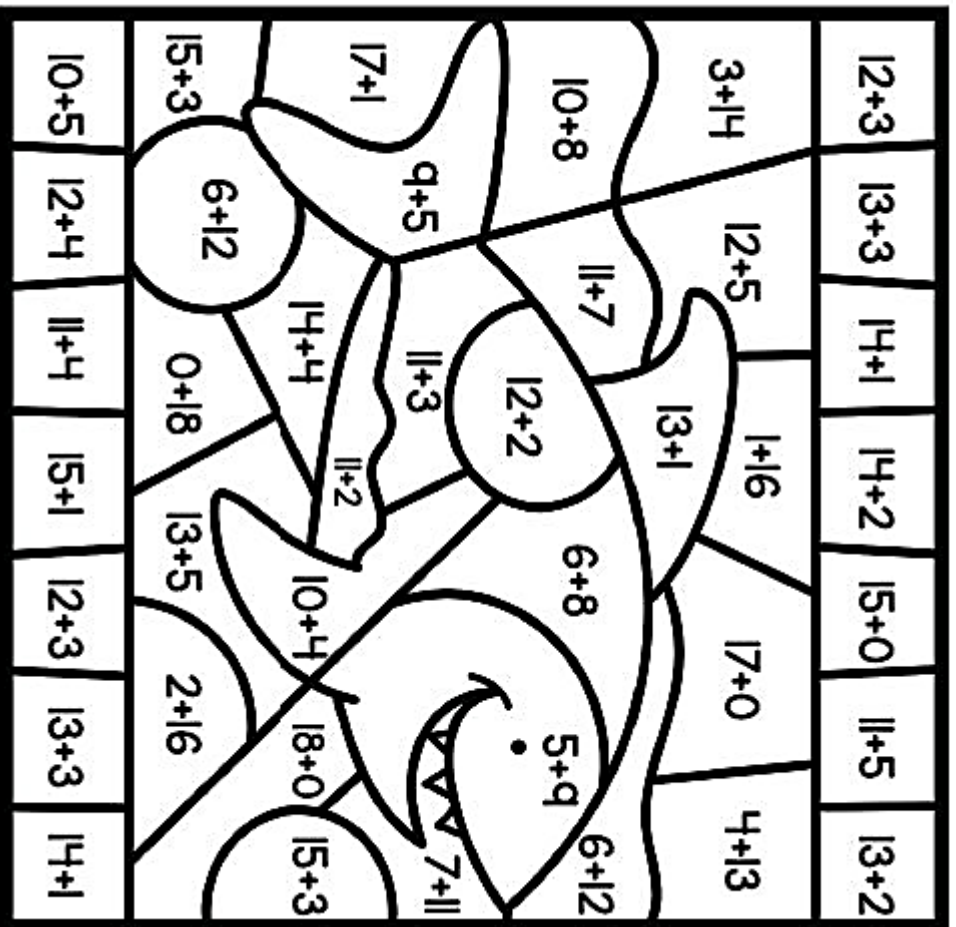
$$+ + =$$



$$5 + 9 =$$

$$+ + =$$

$$+ + =$$







da	u

da	u

da	u

da	u

da	u

da	u

$$13 + 11 = 15 + 12 = 17 + 12 =$$

$$10 + 4 = 16 + 11 = 18 + 10 =$$

da	u

da	u

da	u

da	u

da	u

da	u

$$13 + 11 = 15 + 12 = 17 + 12 =$$

$$10 + 4 = 16 + 11 = 18 + 10 =$$

da	u	da	u	da	u	da	u	da	u

$$25 + 16 = \quad 75 + 17 = \quad 38 + 14 =$$

$$18 + 14 = \quad 66 + 27 =$$

da	u	da	u	da	u	da	u	da	u

$$25 + 16 = \quad 75 + 17 = \quad 38 + 14 =$$

$$18 + 14 = \quad 66 + 27 =$$



**PROBLEMI
CON LE ADDIZIONI**

**PROBLEMI
CON LE ADDIZIONI**



E' LA DESCRIZIONE DI UN FATTO CHE HA BISOGNO DI UNA **SOLUZIONE**.



BLA BA

NEL PROBLEMA CI SONO I NUMERI CHE SI CHIAMANO **DATI**.




PER TROVARE LA SOLUZIONE BISOGNA USARE L'OPERAZIONE GIUSTA.



ALLA FINE DEL PROBLEMA C'E' UNA DOMANDA CHE PERMETTE DI CAPIRE QUAL E' L'OPERAZIONE ADATTA.

????????????????????

LARA HA 5 MATITE ROSSE E 7 MATITE GIALLE.



QUANTE MATITE HA IN TUTTO?

AD HALLOWEEN LUCA HA RACCOLTO 10, CAMELLE, LUIGI 12 CAMELLE E SARA 9 CAMELLE.



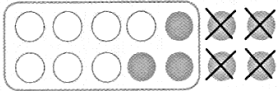
QUANTE CAMELLE HANNO RACCOLTO COMPLESSIVAMENTE?

LA MAMMA HA COMPRATO IL LATTE A 2 EURO, I BISCOTTI A 4 EURO E IL PANE A 3 EURO.

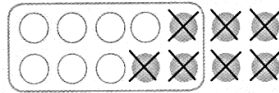


QUANTO HA SPESO IN TUTTO?

$14 - 7 =$



Pensa a 14 come 10 + 4



$14 - 7 =$

$14 - 4 - 3 =$

$10 - 3 = 7$

$16 - 9 =$

$16 - 6 - 3 =$

$10 - 3 = \dots\dots\dots$

$15 - 6 =$

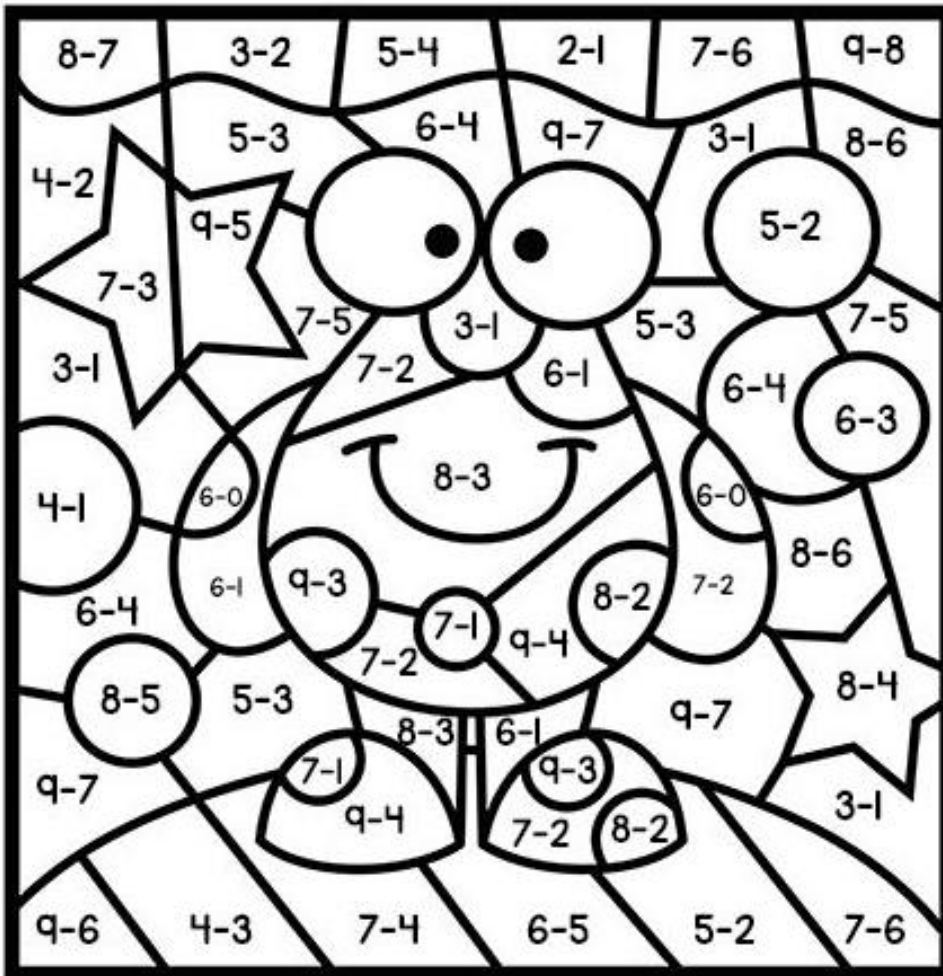
$15 - 5 - 1 =$

$10 - 1 = \dots\dots\dots$

$18 - 9 =$

$\dots\dots - \dots\dots =$

$\dots\dots - \dots\dots = \dots\dots\dots$



da	u	da	u	da	u

da	u	da	u	da	u

$$54 - 22 = 87 - 52 = 39 - 16 =$$

$$56 - 33 = 75 - 34 = 27 - 22 =$$

da	u	da	u	da	u

da	u	da	u	da	u

$$54 - 22 = 87 - 52 = 39 - 16 =$$

$$56 - 33 = 75 - 34 = 27 - 22 =$$

da	u

da	u

da	u

da	u

da	u

$$54 - 18 = \quad 82 - 59 = \quad 72 - 44 =$$

$$54 - 29 = \quad 23 - 17 =$$

da	u

da	u

da	u

da	u

da	u

$$54 - 18 = \quad 82 - 59 = \quad 72 - 44 =$$

$$54 - 29 = \quad 23 - 17 =$$




CON LE SOTTRAZIONI PROBLEMI

SUL VAGONE CI
SONO 56 POSTI A
SEDERE, SALGONO
23 PASSEGGERI.




QUANTI POSTI
LIBERI RESTANO?

LA MAMMA HA
FATTO 28 FRITTELLE.
LUCA NE HA
MANGIATE 5.




QUANTE FRITTELLE
RIMANGONO?


QUANTO E' IL RESTO
DEI SOLDI RIMASTO?




GIORGIA AVEVA NEL
SALVADANAIO 10
EURO. HA COMPRATO
UN LIBRO CHE COSTA
8 EURO.



LA MOLTIPLICAZIONE E'
UN'IMPORTANTE OPERAZIONE,
FA CALCOLI IN VELOCITA'
CON GRANDI QUANTITA'.

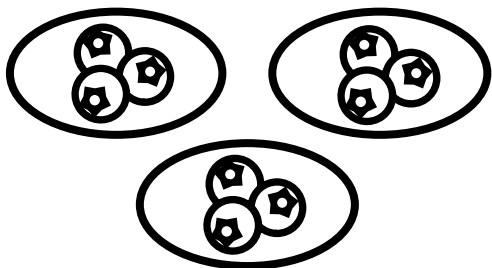


LA MOLTIPLICAZIONE E'
UN'IMPORTANTE OPERAZIONE,
FA CALCOLI IN VELOCITA'
CON GRANDI QUANTITA'.



LA MOLTIPLICAZIONE E'
UN'IMPORTANTE OPERAZIONE,
FA CALCOLI IN VELOCITA'
CON GRANDI QUANTITA'.

PERMETTE DI RIPETERE
PIU' VOLTE UNA STESSA
QUANTITA'.



IL SUO SEGNO E'

(PER)



RISPONDE ALLE DOMANDE

QUANTI SONO IN TUTTO?
QUANTO HA SPESO IN TUTTO?
QUANTI IN TOTALE?
QUANTI COMPLESSIVAMENTE?

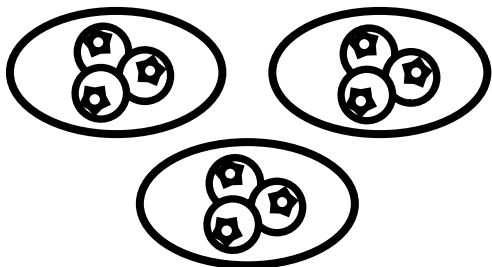
PAROLE CHIAVE
DOPPIO, TRIPLO,
PRODOTTO, TOTALE,
OGNI, CIASCUNO,
CIASCUNA, OGNUNA,
OGNUNO,
COMPLESSIVAMENTE

IL SUO SEGNO E'

(PER)




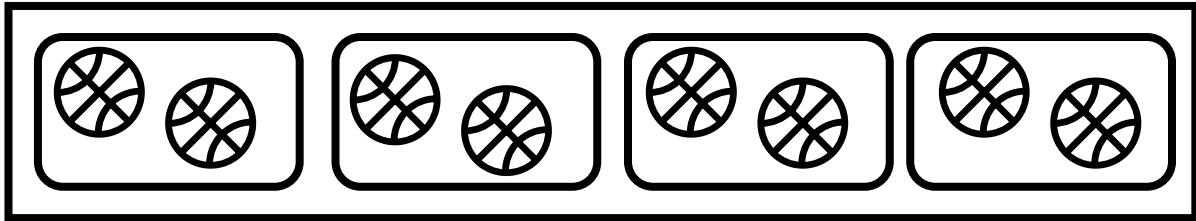


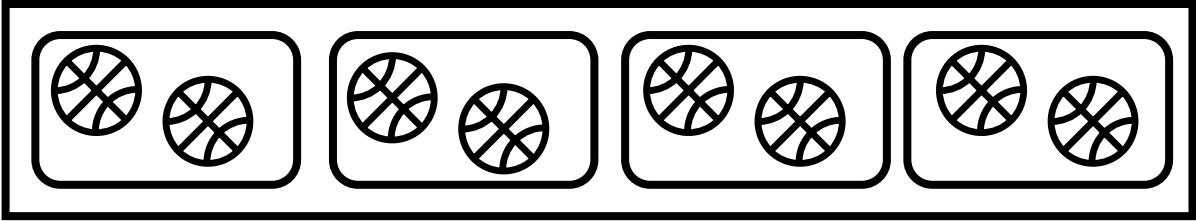

PERMETTE DI RIPETERE
PIU' VOLTE UNA STESSA
QUANTITA'.







RISPONDE ALLE DOMANDE

QUANTI SONO IN TUTTO?
QUANTO HA SPESO IN TUTTO?
QUANTI IN TOTALE?
QUANTI COMPLESSIVAMENTE?

PAROLE CHIAVE
DOPPIO, TRIPLO,
PRODOTTO, TOTALE,
OGNI, CIASCUNO,
CIASCUNA, OGNUNA,
OGNUNO,
COMPLESSIVAMENTE







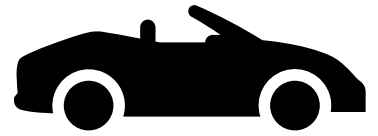
CON LE MOLTIPLICAZIONI PROBLEMI

AL CIRCO 4 GRUPPI
FORMATI DA 5
ACROBATI STANNO
FACENDO GLI
ALLENAMENTI.




COMPLESSIVAMENTE
QUANTI ACROBATI SI
STANNO ALLENANDO?

MARCO GIOCA CON
5 MACCHININE;
OGNI MACCHININA
HA 4 RUOTE.



QUANTE RUOTE
HANNO IN TUTTO LE
MACCHININE DI
MARCO?

QUANTE ANGURIE
HA RACCOLTO IN
TUTTO?




IL CONTADINO HA 6
CASSETTE. HA
MESSO IN
CIASCUNA
CASSETTA 3
ANGURIE.

TABELLINE E TABELLINE

SONO GRANDI E SONO PICCINE.
CON I NUMERI CI SANNO FARE,
CON LORO VELOCEMENTE
PUOI CONTARE.

MA IL TRUCCO SAI QUAL E' ?
IMPARARLE BENE
E SAI PERCHE' ?
CON I NUMERI ALLA MANO
STAI SICURO CHE VAI LONTANO !




	0	1	2	3	4	5	6	7	8	9	10
0	0	0	0	0	0	0	0	0	0	0	0
1	0	1	2	3	4	5	6	7	8	9	10
2	0	2	4	6	8	10	12	14	16	18	20
3	0	3	6	9	12	15	18	21	24	27	30
4	0	4	8	12	16	20	24	28	32	36	40
5	0	5	10	15	20	25	30	35	40	45	50
6	0	6	12	18	24	30	36	42	48	54	60
7	0	7	14	21	28	35	42	49	56	63	60
8	0	8	16	24	32	40	48	56	64	72	80
9	0	9	18	27	36	45	54	63	72	81	80
10	0	10	20	30	40	50	60	70	80	90	100

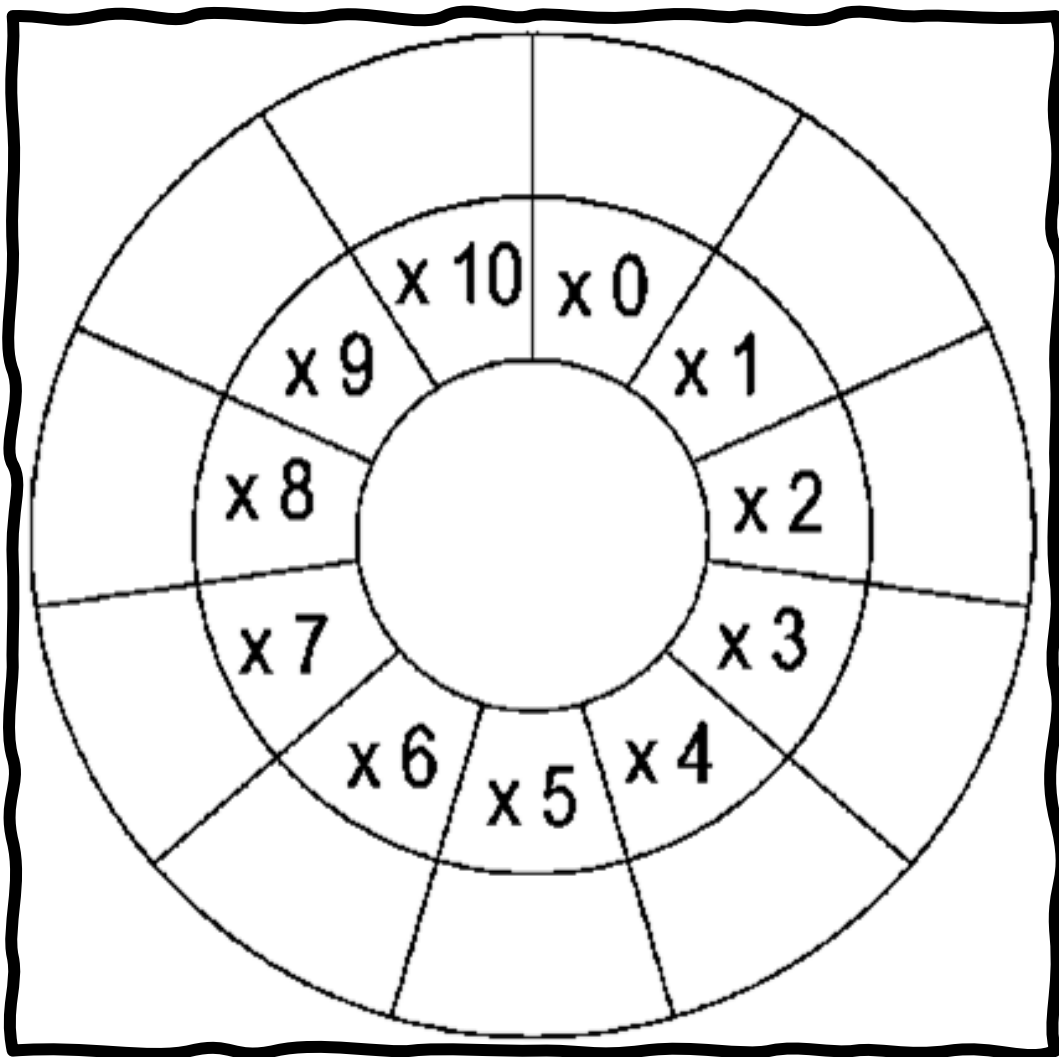
TABELLINE E TABELLINE

SONO GRANDI E SONO PICCINE.
CON I NUMERI CI SANNO FARE,
CON LORO VELOCEMENTE
PUOI CONTARE.

MA IL TRUCCO SAI QUAL E' ?
IMPARARLE BENE
E SAI PERCHE' ?
CON I NUMERI ALLA MANO
STAI SICURO CHE VAI LONTANO !



	0	1	2	3	4	5	6	7	8	9	10
0	0	0	0	0	0	0	0	0	0	0	0
1	0	1	2	3	4	5	6	7	8	9	10
2	0	2	4	6	8	10	12	14	16	18	20
3	0	3	6	9	12	15	18	21	24	27	30
4	0	4	8	12	16	20	24	28	32	36	40
5	0	5	10	15	20	25	30	35	40	45	50
6	0	6	12	18	24	30	36	42	48	54	60
7	0	7	14	21	28	35	42	49	56	63	60
8	0	8	16	24	32	40	48	56	64	72	80
9	0	9	18	27	36	45	54	63	72	81	80
10	0	10	20	30	40	50	60	70	80	90	100



$1 \times 0 = 0$
 $2 \times 0 = 0$
 $3 \times 0 = 0$
 $4 \times 0 = 0$
 $5 \times 0 = 0$
 $6 \times 0 = 0$
 $7 \times 0 = 0$
 $8 \times 0 = 0$
 $9 \times 0 = 0$
 $10 \times 0 = 0$
 $11 \times 0 = 0$
 $12 \times 0 = 0$

$0 \times 1 = 0$
 $0 \times 2 = 0$
 $0 \times 3 = 0$
 $0 \times 4 = 0$
 $0 \times 5 = 0$
 $0 \times 6 = 0$
 $0 \times 7 = 0$
 $0 \times 8 = 0$
 $0 \times 9 = 0$
 $0 \times 10 = 0$
 $0 \times 11 = 0$
 $0 \times 12 = 0$

$1 \times 0 = 0$
 $2 \times 0 = 0$
 $3 \times 0 = 0$
 $4 \times 0 = 0$
 $5 \times 0 = 0$
 $6 \times 0 = 0$
 $7 \times 0 = 0$
 $8 \times 0 = 0$
 $9 \times 0 = 0$
 $10 \times 0 = 0$
 $11 \times 0 = 0$
 $12 \times 0 = 0$

$0 \times 1 = 0$
 $0 \times 2 = 0$
 $0 \times 3 = 0$
 $0 \times 4 = 0$
 $0 \times 5 = 0$
 $0 \times 6 = 0$
 $0 \times 7 = 0$
 $0 \times 8 = 0$
 $0 \times 9 = 0$
 $0 \times 10 = 0$
 $0 \times 11 = 0$
 $0 \times 12 = 0$

$1 \times 2 = \square$
 $2 \times 2 = \square$
 $3 \times 2 = \square$
 $4 \times 2 = \square$
 $5 \times 2 = \square$
 $6 \times 2 = \square$

$7 \times 2 = \square$
 $8 \times 2 = \square$
 $9 \times 2 = \square$
 $10 \times 2 = \square$

$1 \times 3 = \square$
 $2 \times 3 = \square$
 $3 \times 3 = \square$
 $4 \times 3 = \square$
 $5 \times 3 = \square$
 $6 \times 3 = \square$

$7 \times 3 = \square$
 $8 \times 3 = \square$
 $9 \times 3 = \square$
 $10 \times 3 = \square$

$1 \times 4 = \square$
 $2 \times 4 = \square$
 $3 \times 4 = \square$
 $4 \times 4 = \square$
 $5 \times 4 = \square$
 $6 \times 4 = \square$

$7 \times 4 = \square$
 $8 \times 4 = \square$
 $9 \times 4 = \square$
 $10 \times 4 = \square$

$1 \times 2 = \square$
 $2 \times 2 = \square$
 $3 \times 2 = \square$
 $4 \times 2 = \square$
 $5 \times 2 = \square$
 $6 \times 2 = \square$

$7 \times 2 = \square$
 $8 \times 2 = \square$
 $9 \times 2 = \square$
 $10 \times 2 = \square$

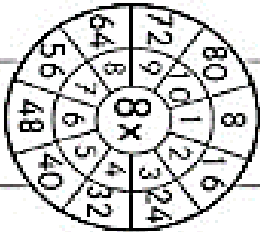
$1 \times 3 = \square$
 $2 \times 3 = \square$
 $3 \times 3 = \square$
 $4 \times 3 = \square$
 $5 \times 3 = \square$
 $6 \times 3 = \square$

$7 \times 3 = \square$
 $8 \times 3 = \square$
 $9 \times 3 = \square$
 $10 \times 3 = \square$

$1 \times 4 = \square$
 $2 \times 4 = \square$
 $3 \times 4 = \square$
 $4 \times 4 = \square$
 $5 \times 4 = \square$
 $6 \times 4 = \square$

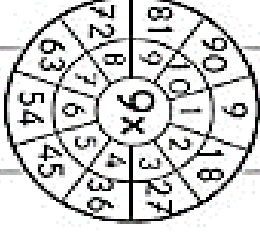
$7 \times 4 = \square$
 $8 \times 4 = \square$
 $9 \times 4 = \square$
 $10 \times 4 = \square$

$1 \times 8 = \square$
 $2 \times 8 = \square$
 $3 \times 8 = \square$
 $4 \times 8 = \square$
 $5 \times 8 = \square$
 $6 \times 8 = \square$
 $7 \times 8 = \square$
 $8 \times 8 = \square$
 $9 \times 8 = \square$
 $10 \times 8 = \square$



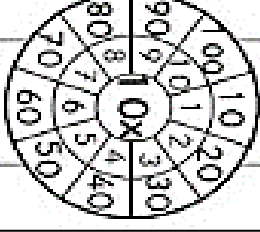
A circular multiplication chart for the number 8. The center contains '8x'. The outer ring lists numbers 1 through 10. The inner ring contains the products: 8, 16, 24, 32, 40, 48, 56, 64, 72, 80.

$1 \times 9 = \square$
 $2 \times 9 = \square$
 $3 \times 9 = \square$
 $4 \times 9 = \square$
 $5 \times 9 = \square$
 $6 \times 9 = \square$
 $7 \times 9 = \square$
 $8 \times 9 = \square$
 $9 \times 9 = \square$
 $10 \times 9 = \square$



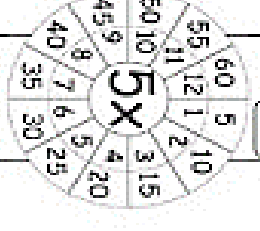
A circular multiplication chart for the number 9. The center contains '9x'. The outer ring lists numbers 1 through 10. The inner ring contains the products: 9, 18, 27, 36, 45, 54, 63, 72, 81, 90.

$1 \times 10 = \square$
 $2 \times 10 = \square$
 $3 \times 10 = \square$
 $4 \times 10 = \square$
 $5 \times 10 = \square$
 $6 \times 10 = \square$
 $7 \times 10 = \square$
 $8 \times 10 = \square$
 $9 \times 10 = \square$
 $10 \times 10 = \square$



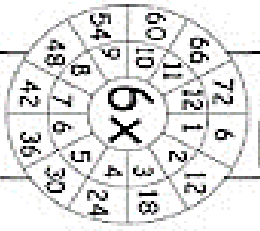
A circular multiplication chart for the number 10. The center contains '10x'. The outer ring lists numbers 1 through 10. The inner ring contains the products: 10, 20, 30, 40, 50, 60, 70, 80, 90, 100.

$1 \times 5 = \square$
 $2 \times 5 = \square$
 $3 \times 5 = \square$
 $4 \times 5 = \square$
 $5 \times 5 = \square$
 $6 \times 5 = \square$
 $7 \times 5 = \square$
 $8 \times 5 = \square$
 $9 \times 5 = \square$
 $10 \times 5 = \square$



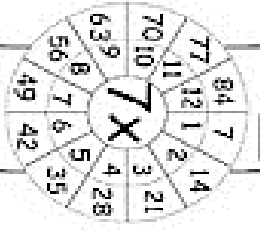
A circular multiplication chart for the number 5. The center contains '5x'. The outer ring lists numbers 1 through 10. The inner ring contains the products: 5, 10, 15, 20, 25, 30, 35, 40, 45, 50.

$1 \times 6 = \square$
 $2 \times 6 = \square$
 $3 \times 6 = \square$
 $4 \times 6 = \square$
 $5 \times 6 = \square$
 $6 \times 6 = \square$
 $7 \times 6 = \square$
 $8 \times 6 = \square$
 $9 \times 6 = \square$
 $10 \times 6 = \square$

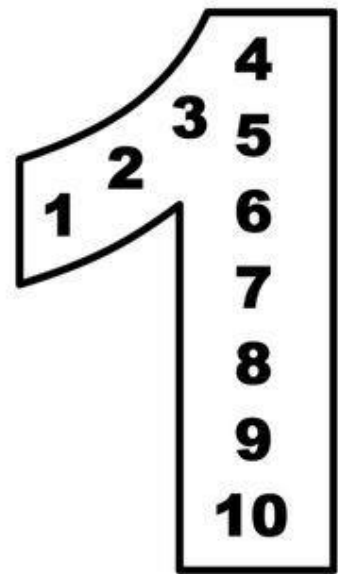
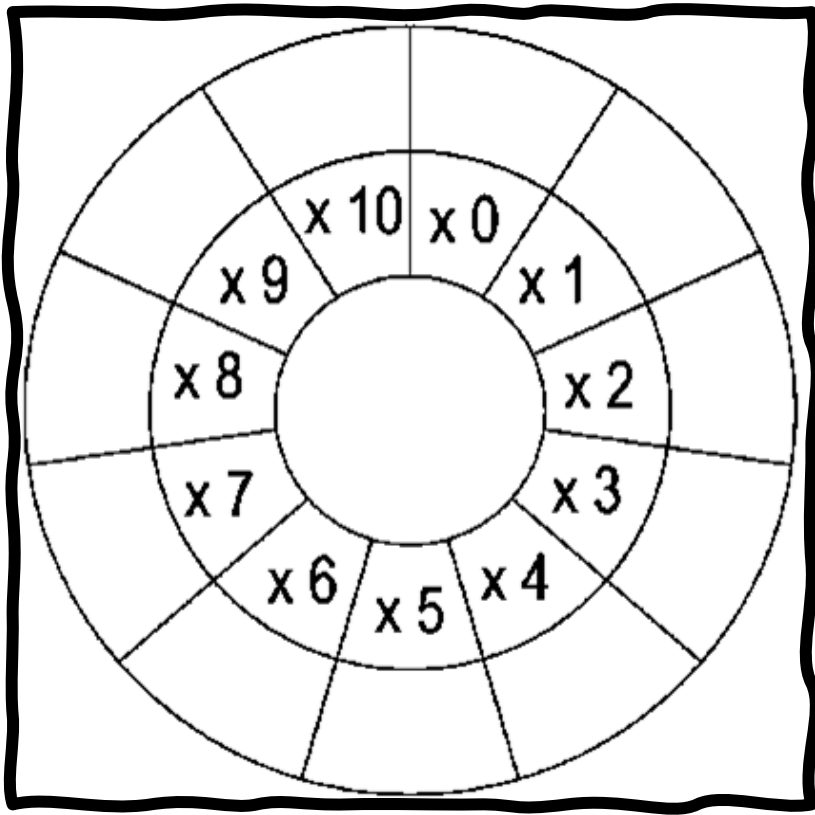


A circular multiplication chart for the number 6. The center contains '6x'. The outer ring lists numbers 1 through 10. The inner ring contains the products: 6, 12, 18, 24, 30, 36, 42, 48, 54, 60.

$1 \times 7 = \square$
 $2 \times 7 = \square$
 $3 \times 7 = \square$
 $4 \times 7 = \square$
 $5 \times 7 = \square$
 $6 \times 7 = \square$
 $7 \times 7 = \square$
 $8 \times 7 = \square$
 $9 \times 7 = \square$
 $10 \times 7 = \square$



A circular multiplication chart for the number 7. The center contains '7x'. The outer ring lists numbers 1 through 10. The inner ring contains the products: 7, 14, 21, 28, 35, 42, 49, 56, 63, 70.



1		1 X 1
1 + 1		1 X 2
1 + 1 + 1		1 X 3
1 + 1 + 1 + 1		1 X 4
1 + 1 + 1 + 1 + 1		1 X 5
1 + 1 + 1 + 1 + 1 + 1		1 X 6
1 + 1 + 1 + 1 + 1 + 1 + 1		1 X 7
1 + 1 + 1 + 1 + 1 + 1 + 1 + 1		1 X 8
1 + 1 + 1 + 1 + 1 + 1 + 1 + 1 + 1		1 X 9
1 + 1 + 1 + 1 + 1 + 1 + 1 + 1 + 1 + 1		1 X 10

1 X 1	
1 X 2	
1 X 3	
1 X 4	
1 X 5	

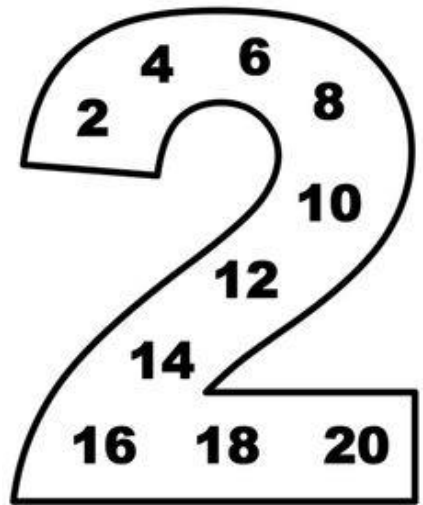
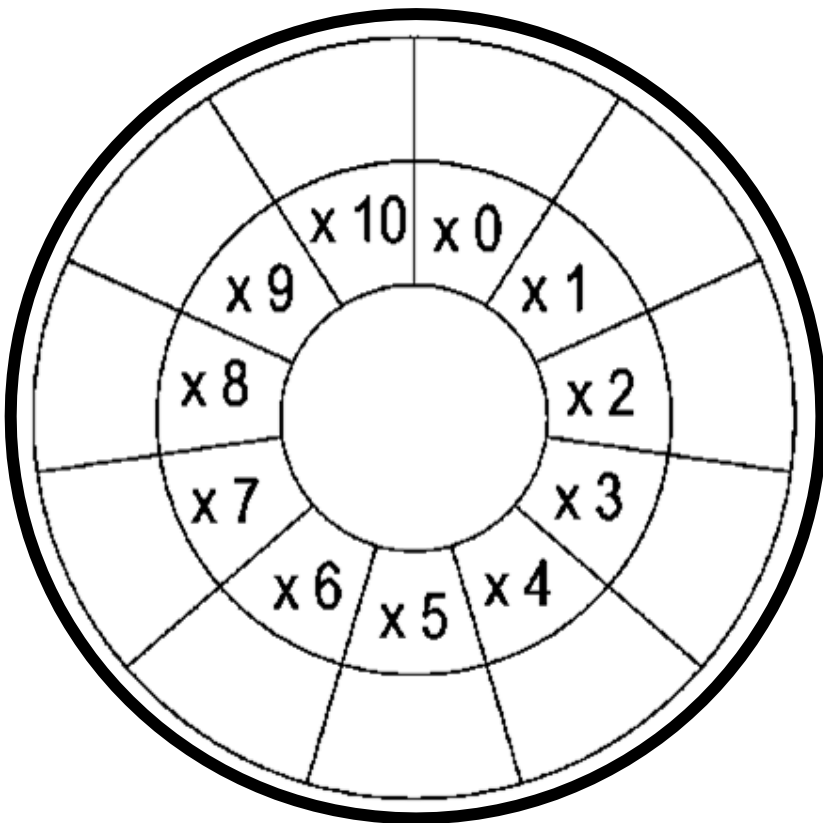
1 X 6	
1 X 7	
1 X 8	
1 X 9	
1 X 10	

1	2	3	4	5
6	7	8	9	10

1 X 1	
1 X 2	
1 X 3	
1 X 4	
1 X 5	

1 X 6	
1 X 7	
1 X 8	
1 X 9	
1 X 10	

1	2	3	4	5
6	7	8	9	10

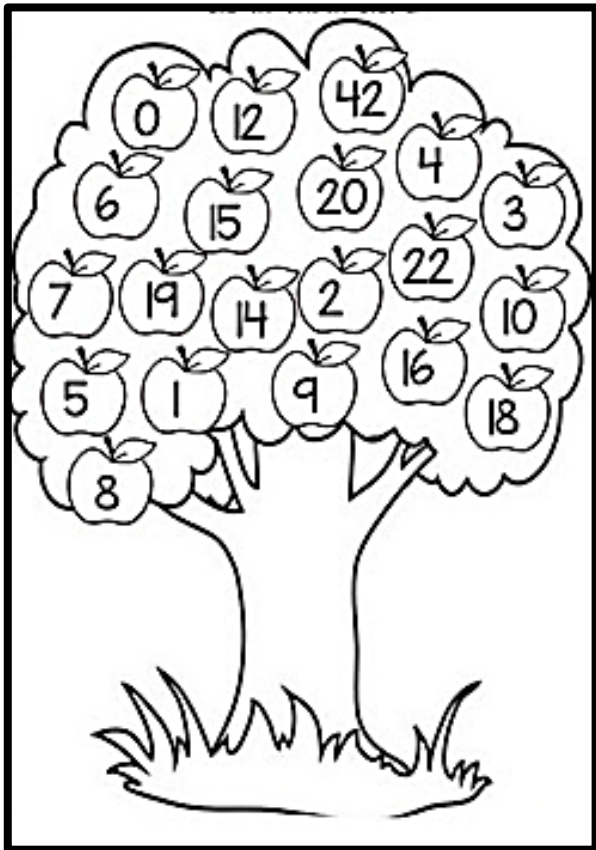


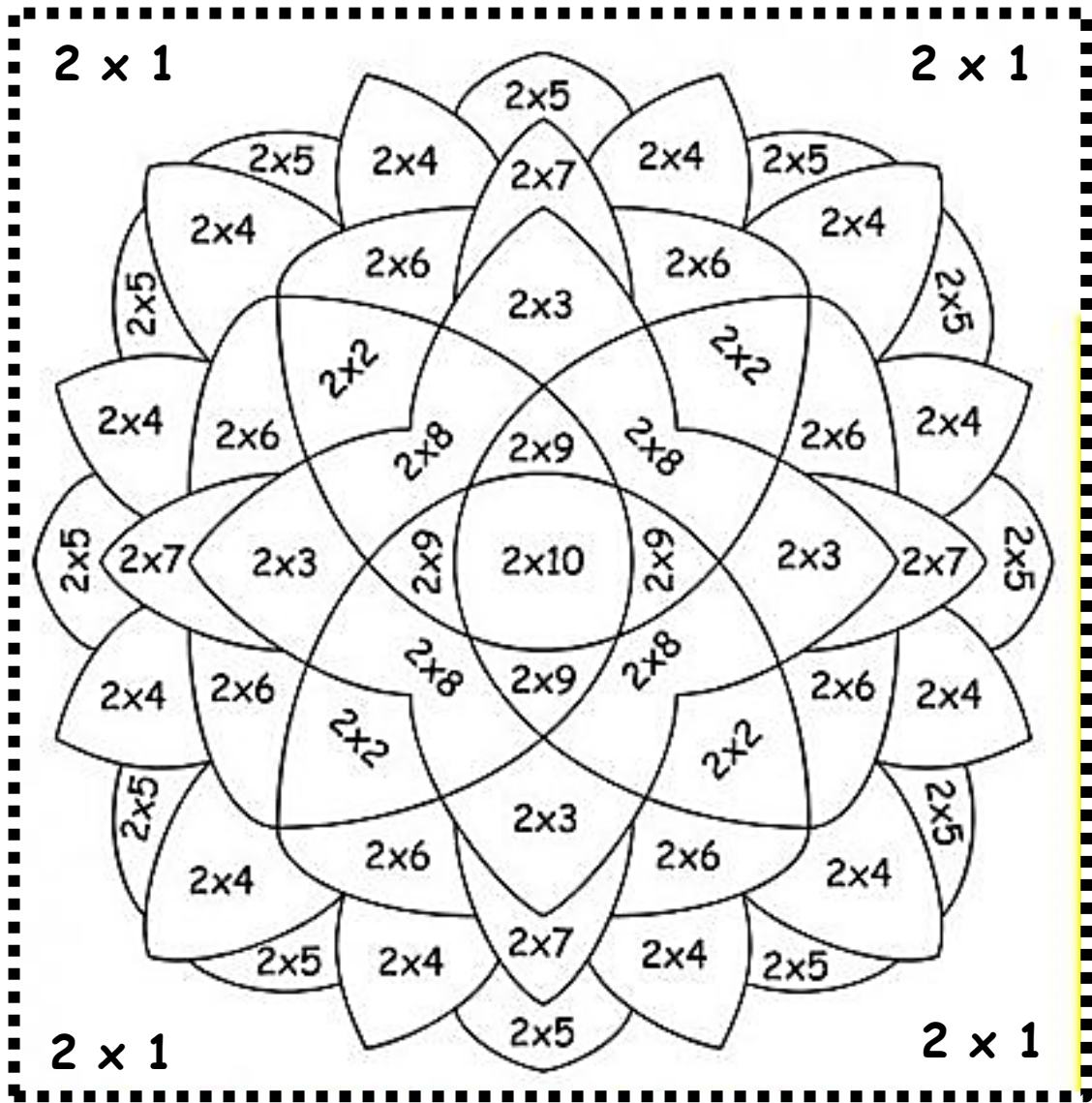
2		2 X 1
2 + 2		2 X 2
2 + 2 + 2		2 X 3
2 + 2 + 2 + 2		2 X 4
2 + 2 + 2 + 2 + 2		2 X 5
2 + 2 + 2 + 2 + 2 + 2		2 X 6
2 + 2 + 2 + 2 + 2 + 2 + 2		2 X 7
2 + 2 + 2 + 2 + 2 + 2 + 2 + 2		2 X 8
2 + 2 + 2 + 2 + 2 + 2 + 2 + 2 + 2		2 X 9
2 + 2 + 2 + 2 + 2 + 2 + 2 + 2 + 2 + 2		2 X 10

2 X 1	
2 X 2	
2 X 3	
2 X 4	
2 X 5	


2 X 6	
2 X 7	
2 X 8	
2 X 9	
2 X 10	

2	4	6	8	10
12	14	16	18	20



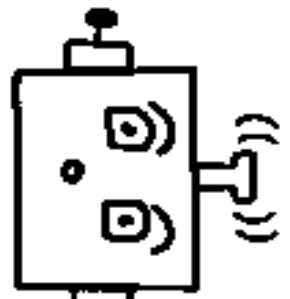


3° QUADERNO DI MATEMATICA 2

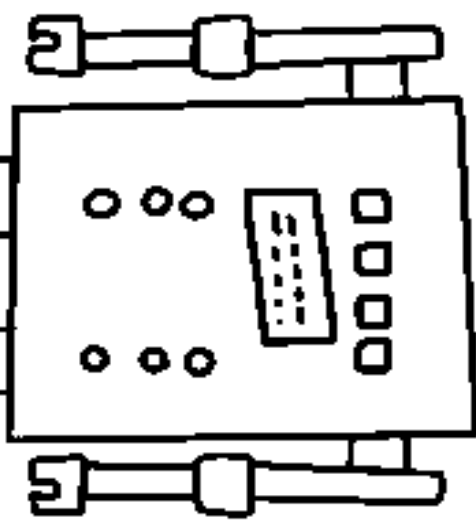


NOME

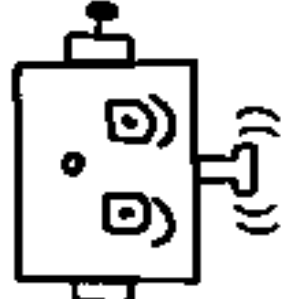
UNO PER
TUTTI E
TUTTI PER
UNO...



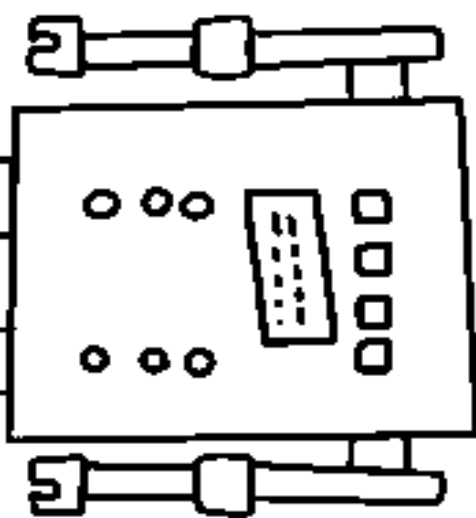
...E
CHE NON
RESTI
INDIETRO
NESSUNO!


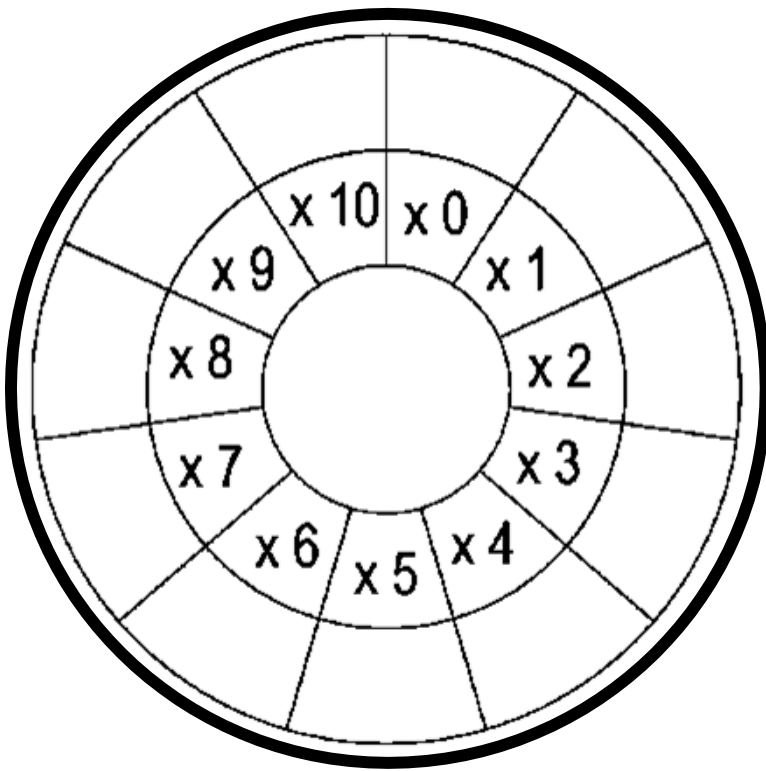


UNO PER
TUTTI E
TUTTI PER
UNO...



...E
CHE NON
RESTI
INDIETRO
NESSUNO!



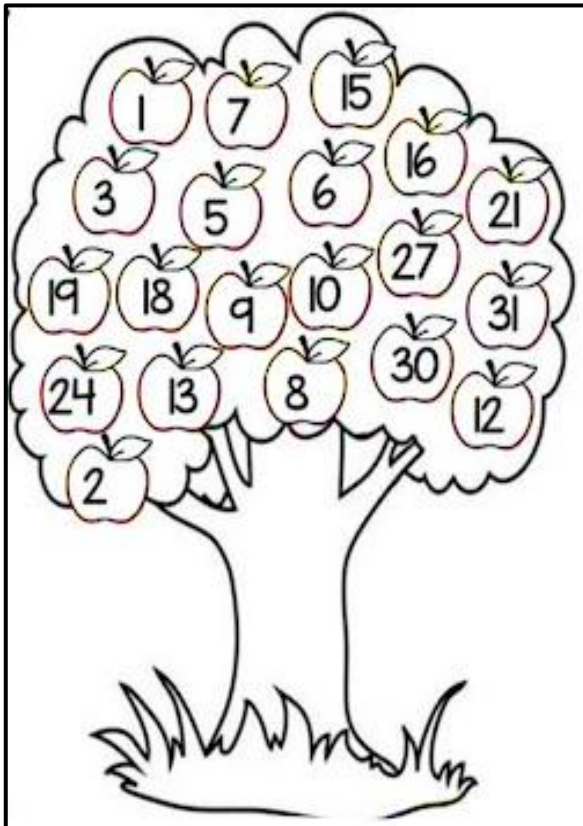


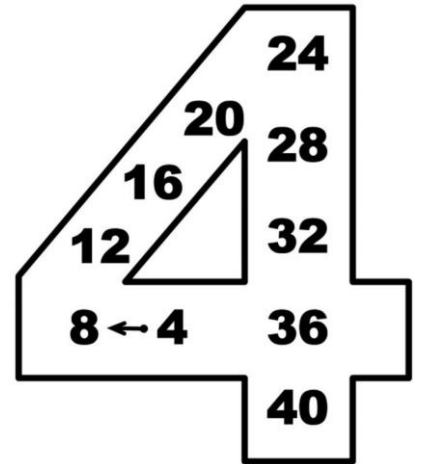
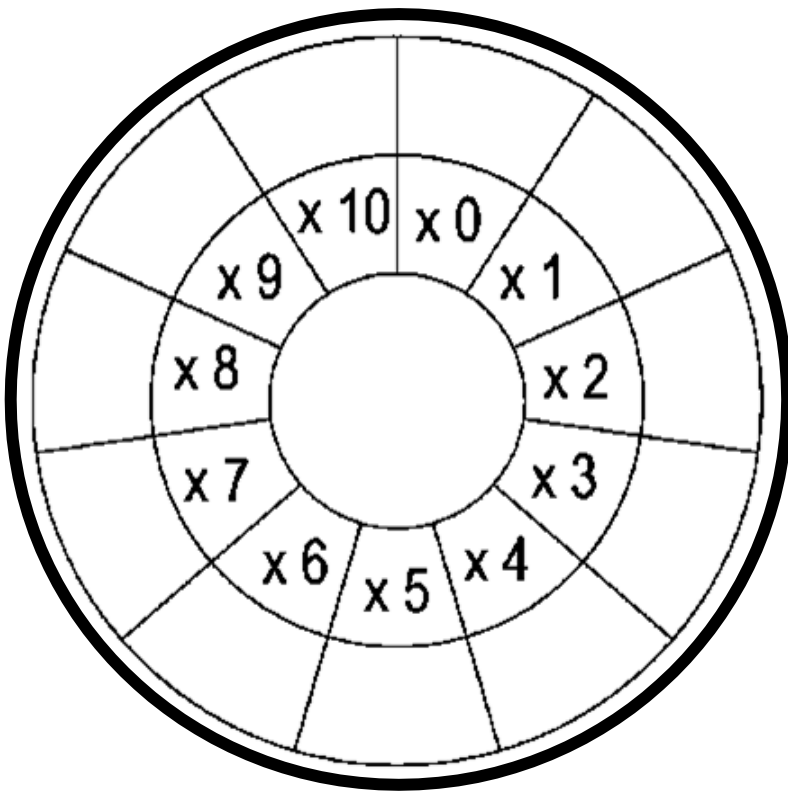
3		3 X 1
3 + 3		3 X 2
3 + 3 + 3		3 X 3
3 + 3 + 3 + 3		3 X 4
3 + 3 + 3 + 3 + 3		3 X 5
3 + 3 + 3 + 3 + 3 + 3		3 X 6
3 + 3 + 3 + 3 + 3 + 3 + 3		3 X 7
3 + 3 + 3 + 3 + 3 + 3 + 3 + 3		3 X 8
3 + 3 + 3 + 3 + 3 + 3 + 3 + 3 + 3		3 X 9
3 + 3 + 3 + 3 + 3 + 3 + 3 + 3 + 3 + 3		3 X 10

3 X 1	
3 X 2	
3 X 3	
3 X 4	
3 X 5	

3 X 6	
3 X 7	
3 X 8	
3 X 9	
3 X 10	

3	6	9	12	15
18	21	24	27	30





4		4 X 1
4 + 4		4 X 2
4 + 4 + 4		4 X 3
4 + 4 + 4 + 4		4 X 4
4 + 4 + 4 + 4 + 4		4 X 5
4 + 4 + 4 + 4 + 4 + 4		4 X 6
4 + 4 + 4 + 4 + 4 + 4 + 4		4 X 7
4 + 4 + 4 + 4 + 4 + 4 + 4 + 4		4 X 8
4 + 4 + 4 + 4 + 4 + 4 + 4 + 4 + 4		4 X 9
4 + 4 + 4 + 4 + 4 + 4 + 4 + 4 + 4 + 4		4 X 10

X	0	1	2	3	4	5	6	7	8	9	10
4			8				24				

X	0	1	2	3	4	5	6	7	8	9	10
5				15				35			

X	0	1	2	3	4	5	6	7	8	9	10
6			12					42			

X	0	1	2	3	4	5	6	7	8	9	10
7				15					56		

X	0	1	2	3	4	5	6	7	8	9	10
8			16						64		


X	0	1	2	3	4	5	6	7	8	9	10
9			18					63			


X	0	1	2	3	4	5	6	7	8	9	10
10				30			60				

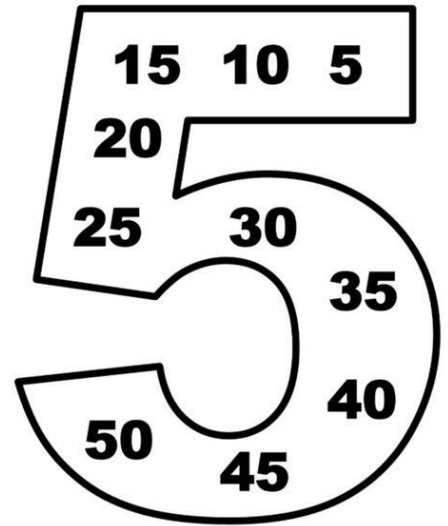
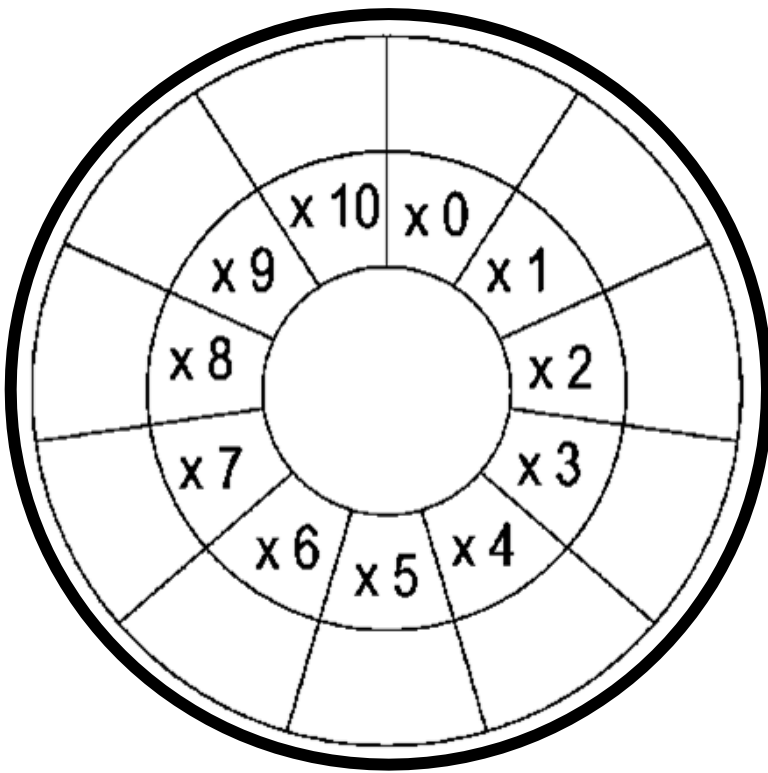
4 X 1	
4 X 2	
4 X 3	
4 X 4	
4 X 5	

4 X 6	
4 X 7	
4 X 8	
4 X 9	
4 X 10	

4	8	12	16	20
24	28	32	36	40








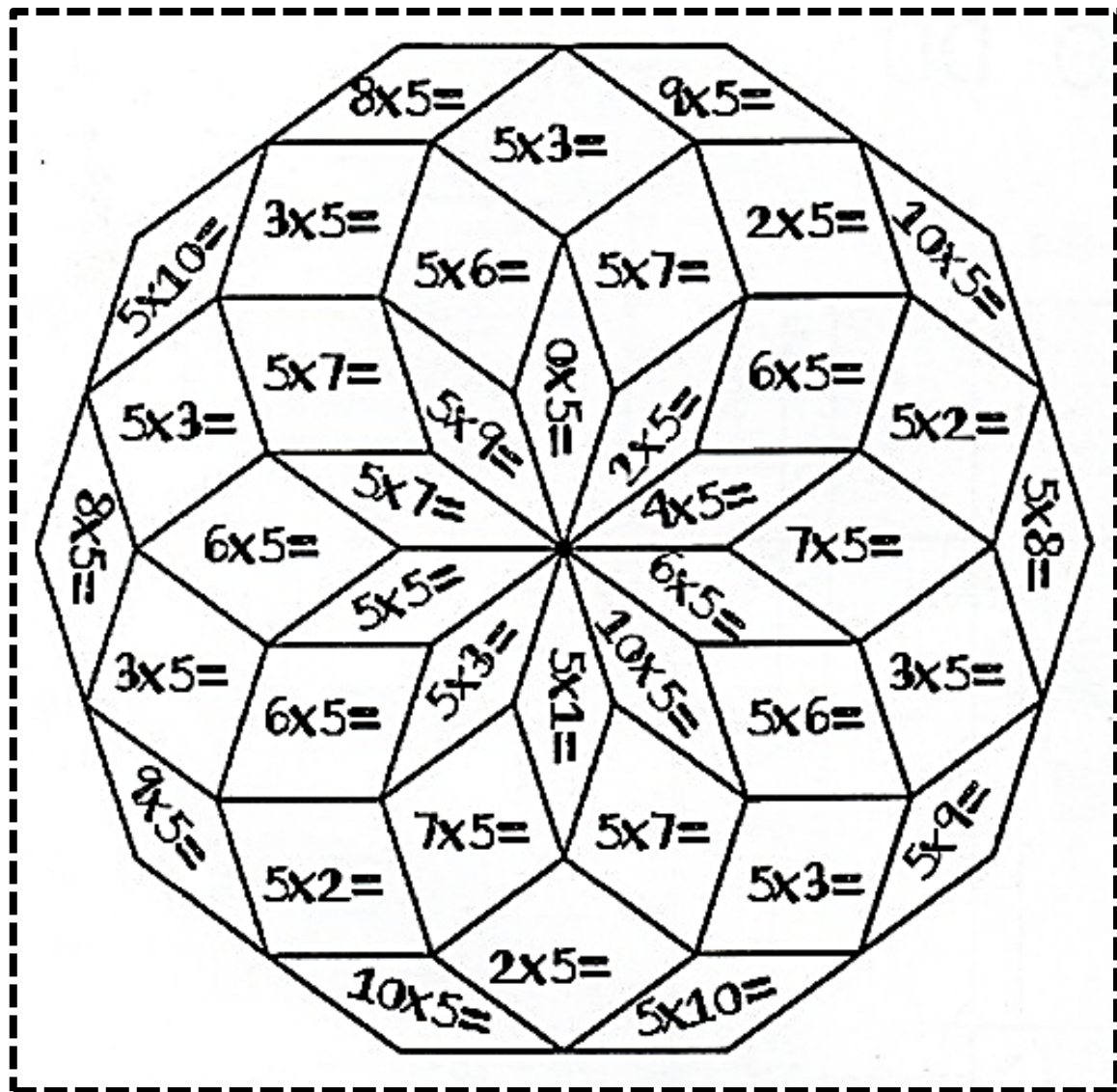
5		5 X 1
5 + 5		5 X 2
5 + 5 + 5		5 X 3
5 + 5 + 5 + 5		5 X 4
5 + 5 + 5 + 5 + 5		5 X 5
5 + 5 + 5 + 5 + 5 + 5		5 X 6
5 + 5 + 5 + 5 + 5 + 5 + 5		5 X 7
5 + 5 + 5 + 5 + 5 + 5 + 5 + 5		5 X 8
5 + 5 + 5 + 5 + 5 + 5 + 5 + 5 + 5		5 X 9
5 + 5 + 5 + 5 + 5 + 5 + 5 + 5 + 5 + 5		5 X 10

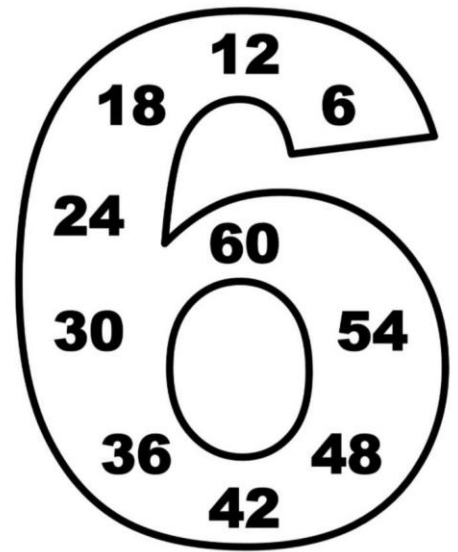
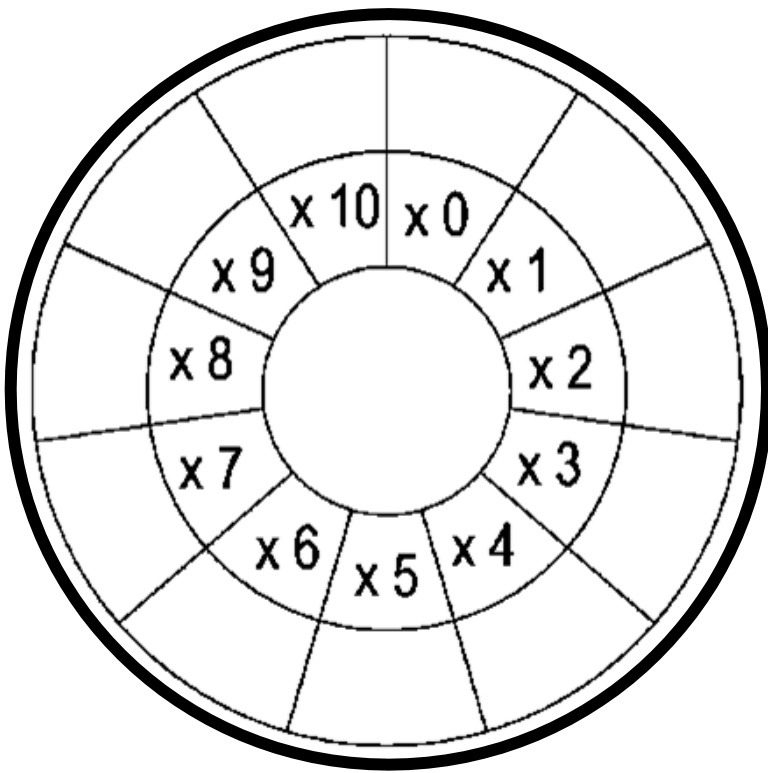
5 X 1	
5 X 2	
5 X 3	
5 X 4	
5 X 5	

5 X 6	
5 X 7	
5 X 8	
5 X 9	
5 X 10	

5	10	15	20	25
30	35	40	45	50









6		6 X 1
6 + 6		6 X 2
6 + 6 + 6		6 X 3
6 + 6 + 6 + 6		6 X 4
6 + 6 + 6 + 6 + 6		6 X 5
6 + 6 + 6 + 6 + 6 + 6		6 X 6
6 + 6 + 6 + 6 + 6 + 6 + 6		6 X 7
6 + 6 + 6 + 6 + 6 + 6 + 6 + 6		6 X 8
6 + 6 + 6 + 6 + 6 + 6 + 6 + 6 + 6		6 X 9
6 + 6 + 6 + 6 + 6 + 6 + 6 + 6 + 6 + 6		6 X 10

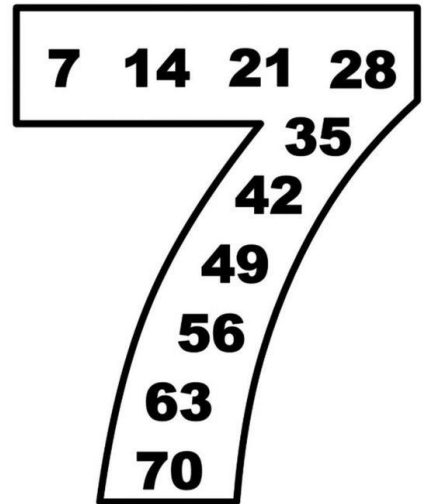
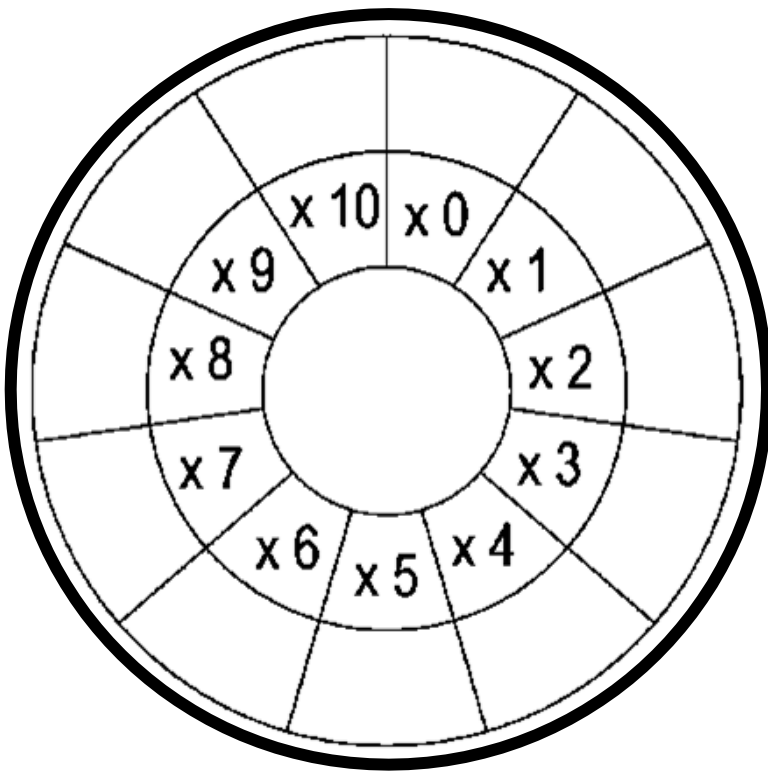
6 X 1	
6 X 2	
6 X 3	
6 X 4	
6 X 5	

6 X 6	
6 X 7	
6 X 8	
6 X 9	
6 X 10	

6	12	18	24	30
36	42	48	54	60





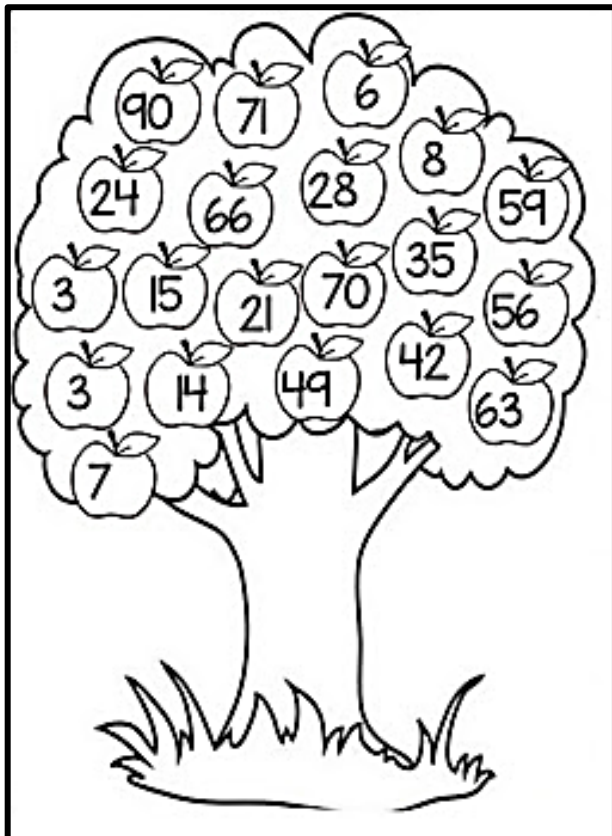



7		7 X 1
7 + 7		7 X 2
7 + 7 + 7		7 X 3
7 + 7 + 7 + 7		7 X 4
7 + 7 + 7 + 7 + 7		7 X 5
7 + 7 + 7 + 7 + 7 + 7		7 X 6
7 + 7 + 7 + 7 + 7 + 7 + 7		7 X 7
7 + 7 + 7 + 7 + 7 + 7 + 7 + 7		7 X 8
7 + 7 + 7 + 7 + 7 + 7 + 7 + 7 + 7		7 X 9
7 + 7 + 7 + 7 + 7 + 7 + 7 + 7 + 7 + 7		7 X 10

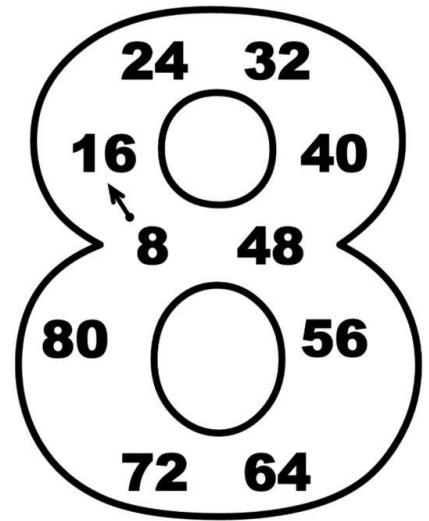
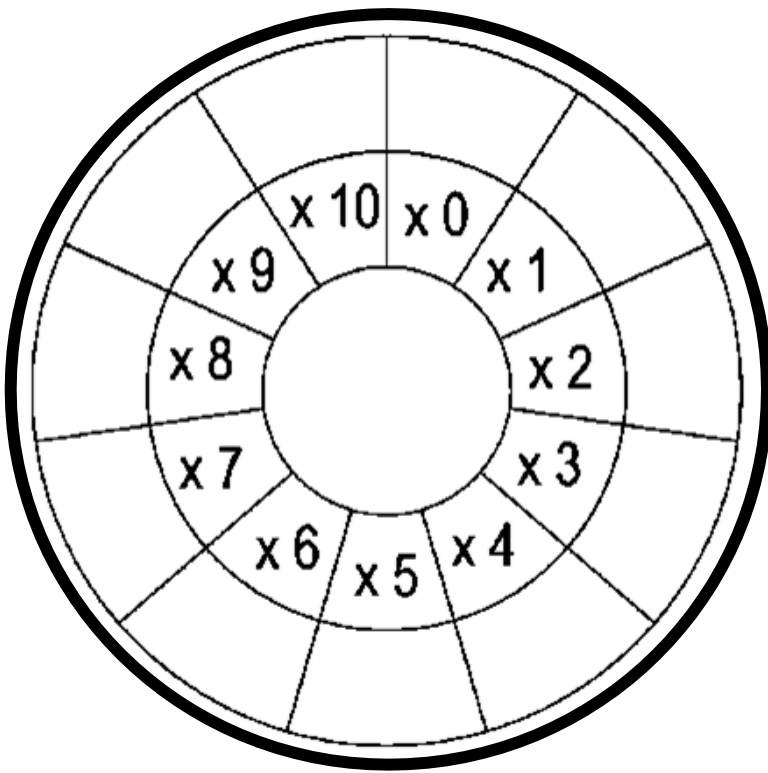
7 X 1	
7 X 2	
7 X 3	
7 X 4	
7 X 5	

7 X 6	
7 X 7	
7 X 8	
7 X 9	
7 X 10	

7	14	21	28	35
42	49	56	63	70





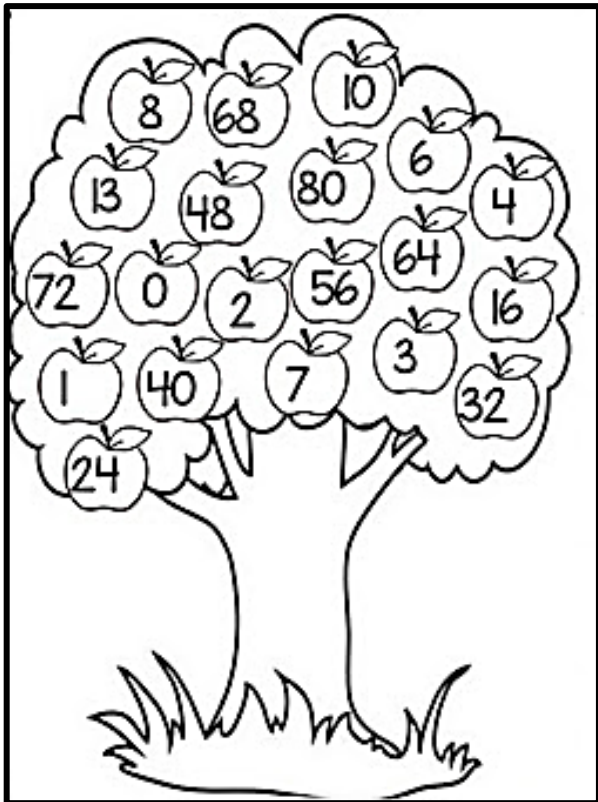


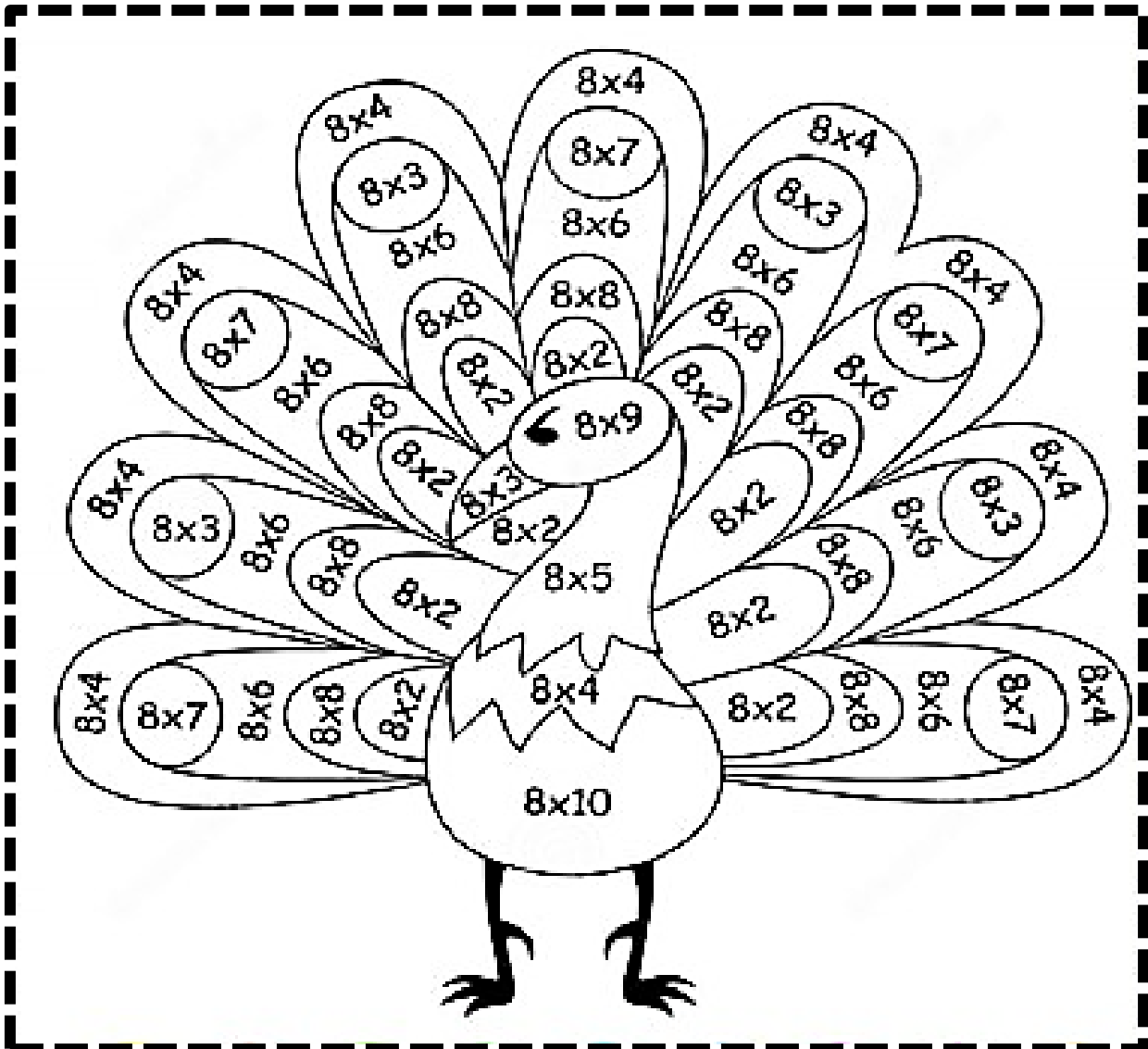
8		8 X 1
8 + 8		8 X 2
8 + 8 + 8		8 X 3
8 + 8 + 8 + 8		8 X 4
8 + 8 + 8 + 8 + 8		8 X 5
8 + 8 + 8 + 8 + 8 + 8		8 X 6
8 + 8 + 8 + 8 + 8 + 8 + 8		8 X 7
8 + 8 + 8 + 8 + 8 + 8 + 8 + 8		8 X 8
8 + 8 + 8 + 8 + 8 + 8 + 8 + 8 + 8		8 X 9
8 + 8 + 8 + 8 + 8 + 8 + 8 + 8 + 8 + 8		8 X 10

8 X 1	
8 X 2	
8 X 3	
8 X 4	
8 X 5	

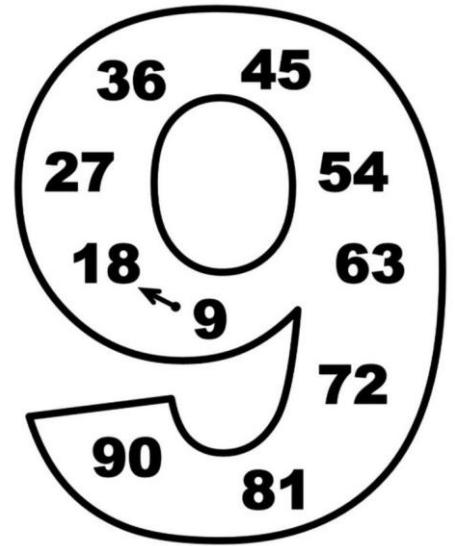
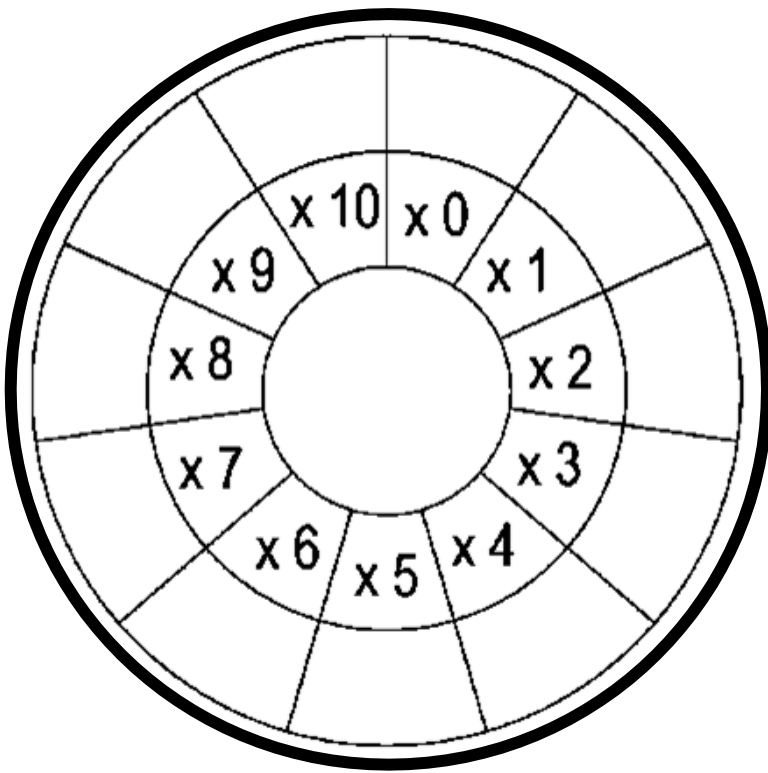
8 X 6	
8 X 7	
8 X 8	
8 X 9	
8 X 10	

8	16	24	32	40
48	56	64	72	80





- 8×4
- 8×7
- 8×4
- 8×3
- 8×6
- 8×6
- 8×3
- 8×4
- 8×7
- 8×6
- 8×8
- 8×8
- 8×6
- 8×4
- 8×7
- 8×8
- 8×2
- 8×2
- 8×8
- 8×6
- 8×8
- 8×2
- 8×2
- 8×8
- 8×2
- 8×8
- 8×6
- 8×3
- 8×4
- 8×3
- 8×6
- 8×8
- 8×2
- 8×2
- 8×8
- 8×2
- 8×8
- 8×2
- 8×8
- 8×6
- 8×3
- 8×4
- 8×4
- 8×7
- 8×6
- 8×7
- 8×4
- 8×10
- 8×4
- 8×2
- 8×8
- 8×6
- 8×7
- 8×4

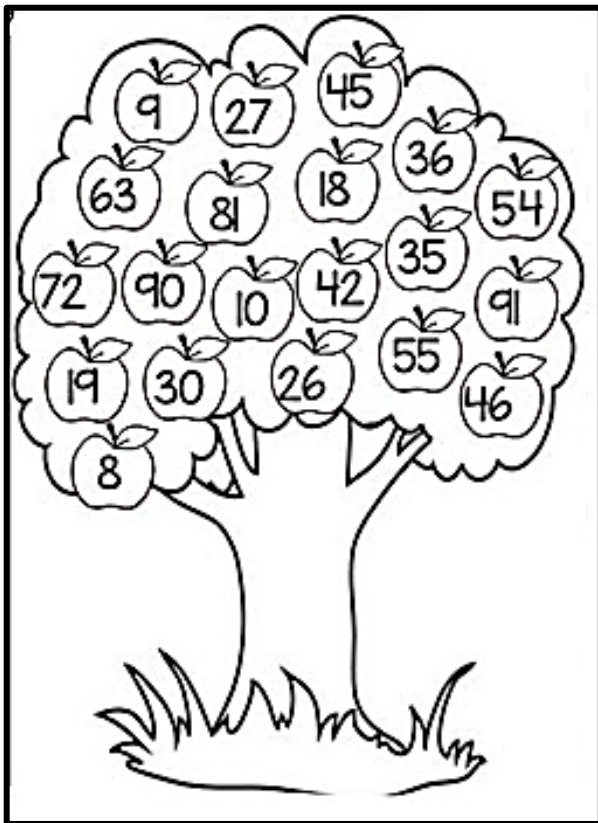


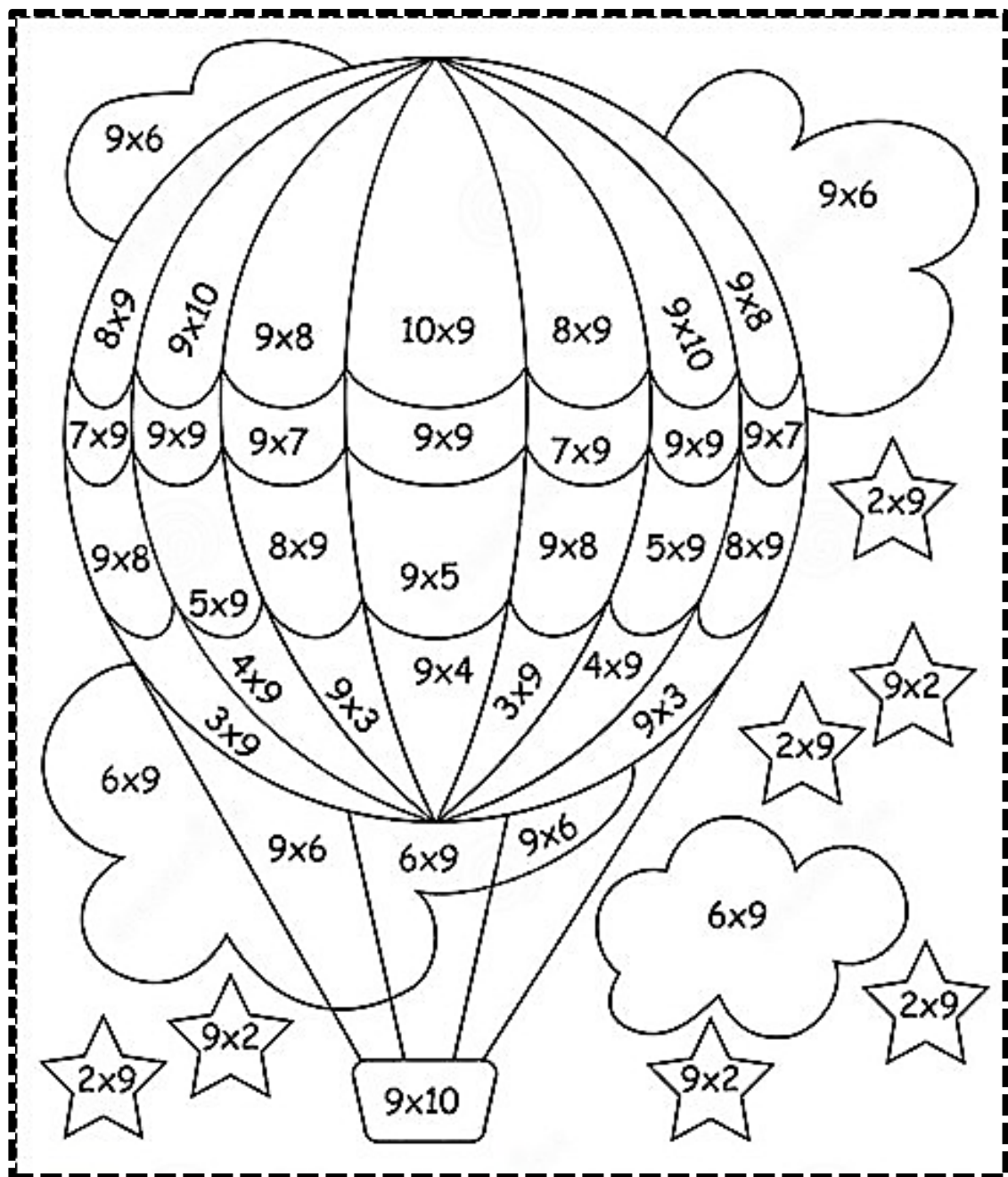
9		9 X 1
9 + 9		9 X 2
9 + 9 + 9		9 X 3
9 + 9 + 9 + 9		9 X 4
9 + 9 + 9 + 9 + 9		9 X 5
9 + 9 + 9 + 9 + 9 + 9		9 X 6
9 + 9 + 9 + 9 + 9 + 9 + 9		9 X 7
9 + 9 + 9 + 9 + 9 + 9 + 9 + 9		9 X 8
9 + 9 + 9 + 9 + 9 + 9 + 9 + 9 + 9		9 X 9
9 + 9 + 9 + 9 + 9 + 9 + 9 + 9 + 9 + 9		9 X 10

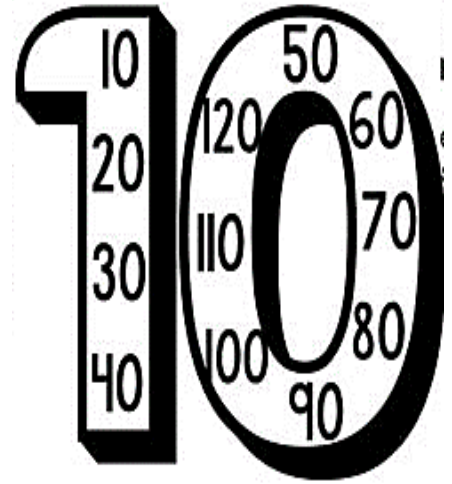
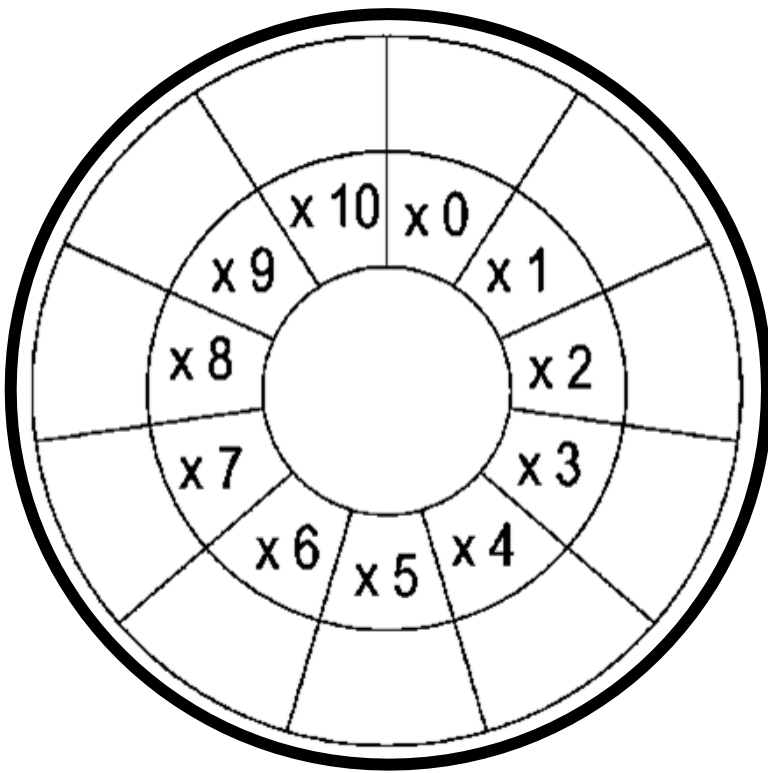
9 X 1	
9 X 2	
9 X 3	
9 X 4	
9 X 5	

9 X 6	
9 X 7	
9 X 8	
9 X 9	
9 X 10	

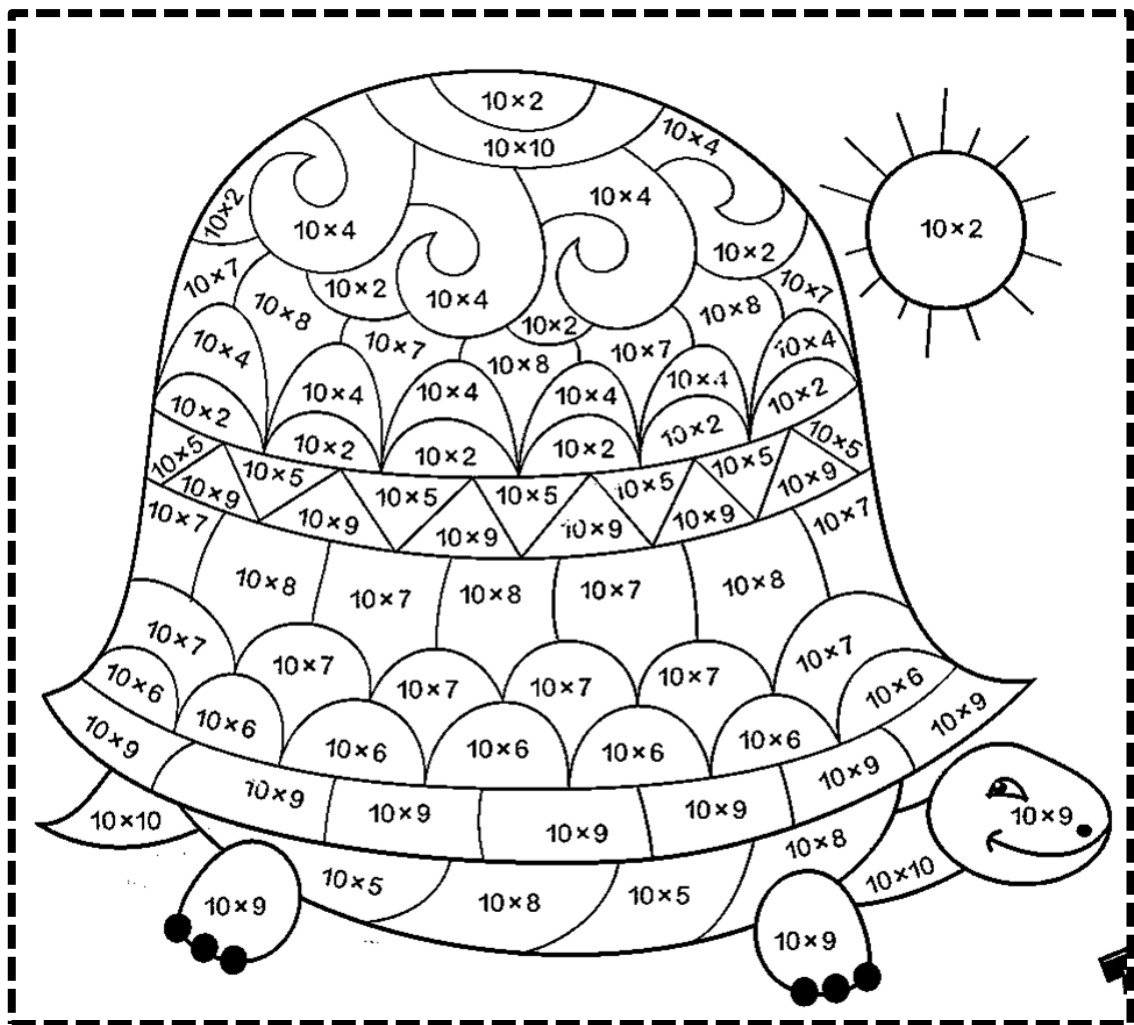
9	18	27	36	45
54	63	72	81	90








10		10 X 1
10 + 10		10 X 2
10 + 10 + 10		10 X 3
10 + 10 + 10 + 10		10 X 4
10 + 10 + 10 + 10 + 10		10 X 5
10 + 10 + 10 + 10 + 10 + 10		10 X 6
10 + 10 + 10 + 10 + 10 + 10 + 10		10 X 7
10 + 10 + 10 + 10 + 10 + 10 + 10 + 10		10 X 8
10 + 10 + 10 + 10 + 10 + 10 + 10 + 10 + 10		10 X 9
10 + 10 + 10 + 10 + 10 + 10 + 10 + 10 + 10 + 10		10 X 10



10 X 1	
10 X 2	
10 X 3	
10 X 4	
10 X 5	




10 X 6	
10 X 7	
10 X 8	
10 X 9	
10 X 10	

10	20	30	40	50
60	70	80	90	100



x	0	1	2	3	4	5	6	7	8	9	10
0	0	0	0	0	0	0	0	0	0	0	0
1	0	1	2	3	4	5	6	7	8	9	10
2	0	2	4	6	8	10	12	14	16	18	20
3	0	3	6	9	12	15	18	21	24	27	30
4	0	4	8	12	16	20	24	28	32	36	40
5	0	5	10	15	20	25	30	35	40	45	50
6	0	6	12	18	24	30	36	42	48	54	60
7	0	7	14	21	28	35	42	49	56	63	70
8	0	8	16	24	32	40	48	56	64	72	80
9	0	9	18	27	36	45	54	63	72	81	90
10	0	10	20	30	40	50	60	70	80	90	100

X	0	1	2	3	4	5	6	7	8	9	10
0	0	0	0		0	0	0	0		0	0
1	0		2	3	4		6		8	9	10
2		2	4		8	10	12	14		18	
3	0		6	9		15	18		24	27	30
4	0		8		16	20		28	32	36	
5		5	10	15	20	25		35	40		50
6	0	6		18		30	36	42		54	60
7	0		14	21	28		42		56		70
8		8	16		32	40	48		64	72	80
9	0		18	27		45		63	72	81	
10	0	10		30	40		60	70		90	100



x	0	1	2	3	4	5	6	7	8	9	10
0	0	0	0	0	0	0	0	0	0	0	0
1	0	1	2	3	4	5	6	7	8	9	10
2	0	2	4	6	8	10	12	14	16	18	20
3	0	3	6	9	12	15	18	21	24	27	30
4	0	4	8	12	16	20	24	28	32	36	40
5	0	5	10	15	20	25	30	35	40	45	50
6	0	6	12	18	24	30	36	42	48	54	60
7	0	7	14	21	28	35	42	49	56	63	70
8	0	8	16	24	32	40	48	56	64	72	80
9	0	9	18	27	36	45	54	63	72	81	90
10	0	10	20	30	40	50	60	70	80	90	100

x	0	1	2	3	4	5	6	7	8	9	10
0	0	0	0	0	0	0	0	0	0	0	0
1	0	1	2	3	4	5	6	7	8	9	10
2	0	2	4	6	8	10	12	14	16	18	20
3	0	3	6	9	12	15	18	21	24	27	30
4	0	4	8	12	16	20	24	28	32	36	40
5	0	5	10	15	20	25	30	35	40	45	50
6	0	6	12	18	24	30	36	42	48	54	60
7	0	7	14	21	28	35	42	49	56	63	70
8	0	8	16	24	32	40	48	56	64	72	80
9	0	9	18	27	36	45	54	63	72	81	90
10	0	10	20	30	40	50	60	70	80	90	100

x	0	1	2	3	4	5	6	7	8	9	10
0	0	0	0	0	0	0	0	0	0	0	0
1	0	1	2	3	4	5	6	7	8	9	10
2	0	2	4	6	8	10	12	14	16	18	20
3	0	3	6	9	12	15	18	21	24	27	30
4	0	4	8	12	16	20	24	28	32	36	40
5	0	5	10	15	20	25	30	35	40	45	50
6	0	6	12	18	24	30	36	42	48	54	60
7	0	7	14	21	28	35	42	49	56	63	70
8	0	8	16	24	32	40	48	56	64	72	80
9	0	9	18	27	36	45	54	63	72	81	90
10	0	10	20	30	40	50	60	70	80	90	100

x	0	1	2	3	4	5	6	7	8	9	10
0	0	0	0	0	0	0	0	0	0	0	0
1	0	1	2	3	4	5	6	7	8	9	10
2	0	2	4	6	8	10	12	14	16	18	20
3	0	3	6	9	12	15	18	21	24	27	30
4	0	4	8	12	16	20	24	28	32	36	40
5	0	5	10	15	20	25	30	35	40	45	50
6	0	6	12	18	24	30	36	42	48	54	60
7	0	7	14	21	28	35	42	49	56	63	70
8	0	8	16	24	32	40	48	56	64	72	80
9	0	9	18	27	36	45	54	63	72	81	90
10	0	10	20	30	40	50	60	70	80	90	100

x	0	1	2	3	4	5	6	7	8	9	10
0	0	0	0	0	0	0	0	0	0	0	0
1	0	1	2	3	4	5	6	7	8	9	10
2	0	2	4	6	8	10	12	14	16	18	20
3	0	3	6	9	12	15	18	21	24	27	30
4	0	4	8	12	16	20	24	28	32	36	40
5	0	5	10	15	20	25	30	35	40	45	50
6	0	6	12	18	24	30	36	42	48	54	60
7	0	7	14	21	28	35	42	49	56	63	70
8	0	8	16	24	32	40	48	56	64	72	80
9	0	9	18	27	36	45	54	63	72	81	90
10	0	10	20	30	40	50	60	70	80	90	100

x	0	1	2	3	4	5	6	7	8	9	10
0	0	0	0	0	0	0	0	0	0	0	0
1	0	1	2	3	4	5	6	7	8	9	10
2	0	2	4	6	8	10	12	14	16	18	20
3	0	3	6	9	12	15	18	21	24	27	30
4	0	4	8	12	16	20	24	28	32	36	40
5	0	5	10	15	20	25	30	35	40	45	50
6	0	6	12	18	24	30	36	42	48	54	60
7	0	7	14	21	28	35	42	49	56	63	70
8	0	8	16	24	32	40	48	56	64	72	80
9	0	9	18	27	36	45	54	63	72	81	90
10	0	10	20	30	40	50	60	70	80	90	100

**MOLTIPLICAZIONI
SEMPLICI**

**MOLTIPLICAZIONI
CON
IL CAMBIO**

**MOLTIPLICAZIONI
SEMPLICI**

**MOLTIPLICAZIONI
CON
IL CAMBIO**

**MOLTIPLICAZIONI
SEMPLICI**

**MOLTIPLICAZIONI
CON
IL CAMBIO**

**MOLTIPLICAZIONI
SEMPLICI**

**MOLTIPLICAZIONI
CON
IL CAMBIO**

**MOLTIPLICAZIONI
SEMPLICI**

**MOLTIPLICAZIONI
CON
IL CAMBIO**

h	da	u
	2	3x 6=

h	da	u
	3	3x 5=

h	da	u
	4	5x 3=

h	da	u
	2	3x 6=

h	da	u
	3	3x 5=

h	da	u
	4	5x 3=

h	da	u
	2	3x 6=



h	da	u
	3	3x 5=

h	da	u
	4	5x 3=


h	da	u
	2	3x 6=

h	da	u
	3	3x 5=

h	da	u
	4	5x 3=

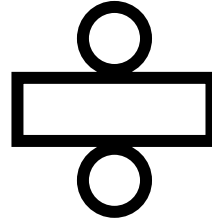


PERMETTE DI
SUDDIVIDERE,
DISTRIBUIRE E
RAGGRUPPARE UNA
QUANTITA'.



IL SUO SEGNO E'

(DIVISO)



RISPONDE ALLE DOMANDE

QUANTI GRUPPI SI POSSONO FARE?

QUANTI AD OGNUNO?

PER OGNI...?

A CIASCUNO...?

QUANTO E' COSTATO UNO?

IN QUANTE PARTI...?

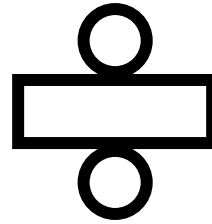
QUANTI GRUPPI?

PAROLE CHIAVE


DIVIDERE, SUDDIVIDERE,
DISTRIBUIRE, RIPARTIRE,
CONTENERE,
RAGGRUPPARE, OGNI,
CIASCUNO, A TESTA

IL SUO SEGNO E'

(DIVISO)



PERMETTE DI
SUDDIVIDERE,
DISTRIBUIRE E
RAGGRUPPARE UNA
QUANTITA'.



RISPONDE ALLE DOMANDE

QUANTI GRUPPI SI POSSONO FARE?

QUANTI AD OGNUNO?

PER OGNI...?

A CIASCUNO...?

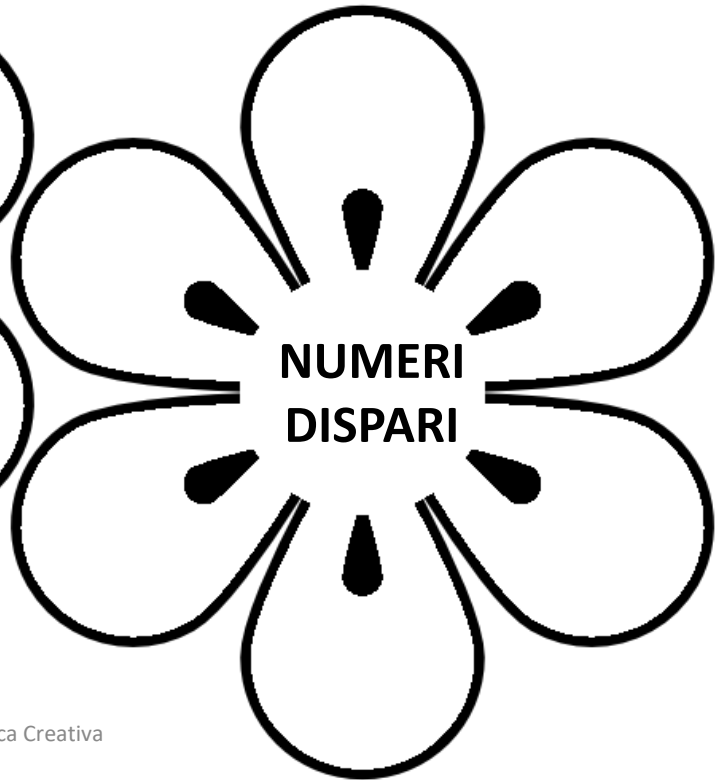
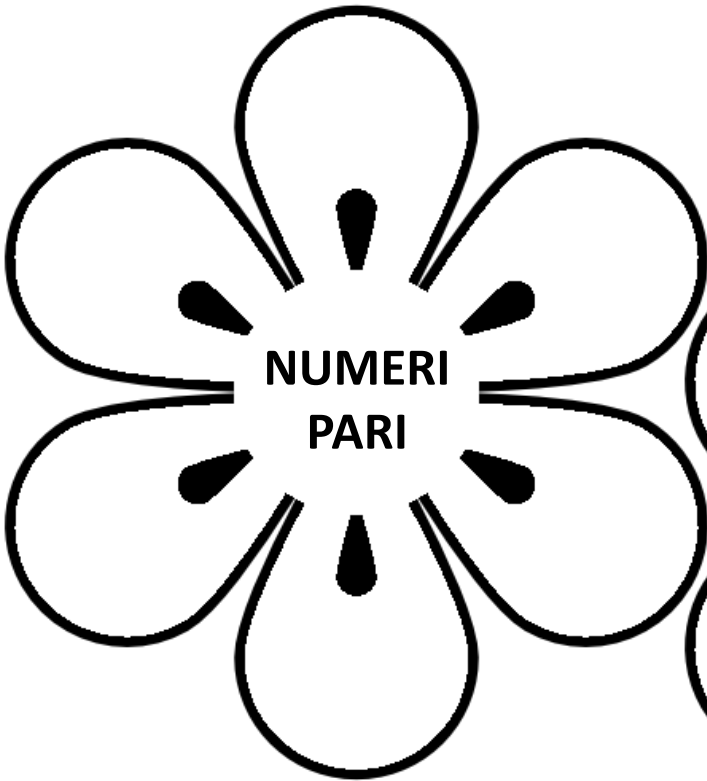



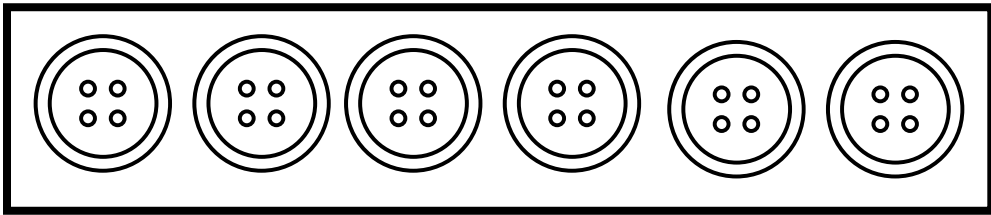
QUANTO E' COSTATO UNO?

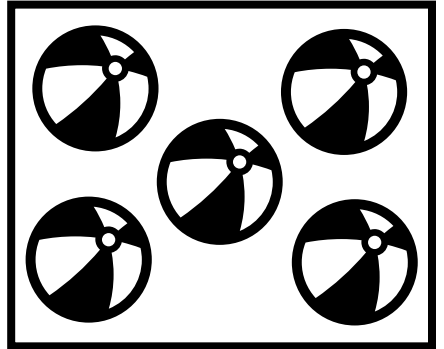


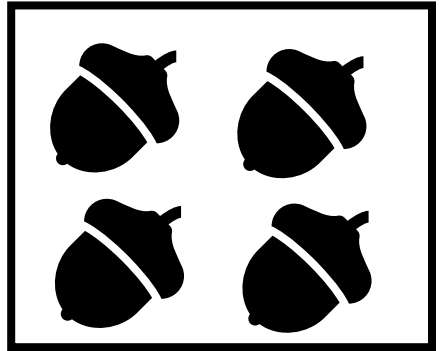


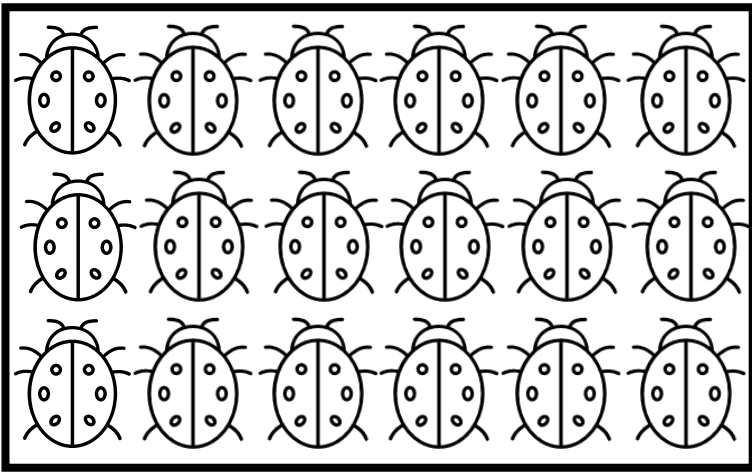
IN QUANTE PARTI...?


QUANTI GRUPPI?

PAROLE CHIAVE

DIVIDERE, SUDDIVIDERE,
DISTRIBUIRE, RIPARTIRE,
CONTENERE,
RAGGRUPPARE, OGNI,
CIASCUNO, A TESTA










PROBLEMI CON LE DIVISIONI

LA MAESTRA DEVE
DIVIDERE 9
BAMBINI IN GRUPPI
DA 3.




QUANTI GRUPPI
PUO' FORMARE?

GIOVANNI HA 12
FIGURINE DA
DIVIDERE IN PARTI
UGUALI TRA I SUOI 3
AMICI.



QUANTE FIGURINE
DEVE DARE AD
OGNI AMICO?

QUANTI FIORI PUO'
PIANTARE IN OGNI
VASO? QUANTI
FIORI RESTANO
SENZA VASO?



IL FIORAIO DEVE
PIANTARE 11 FIORI
IN 3 VASI.

DUE CILIEGIE




META'

DOPPIO

TRIPLO

QUATTRO FIORI



META'

DOPPIO

TRIPLO

DUE CILIEGIE




META'

DOPPIO

TRIPLO

QUATTRO FIORI



META'

DOPPIO

TRIPLO

**IL PROBLEMA
È...**

?

È LA
DESCRIZIONE DI
UNA SITUAZIONE
CHE HA BISOGNO
DI UNA
SOLUZIONE.

+

PAROLE CHIAVE
IN TUTTO, TOTALE,
COMPLESSIVA-
MENTE, IN TOTALE,
SOMMA,
AGGIUNGERE.

**CON
L'ADDIZIONE...**

-

PAROLE CHIAVE
DIFFERENZA,
RESTO, RIMANE,
TOGLIERE,
SOTTRARRE, IN
PIU', IN MENO

x

PAROLE CHIAVE
OGNI, CIASCUNO,
OGNUNO
NELLA DOMANDA IN
TUTTO, IN TOTALE.

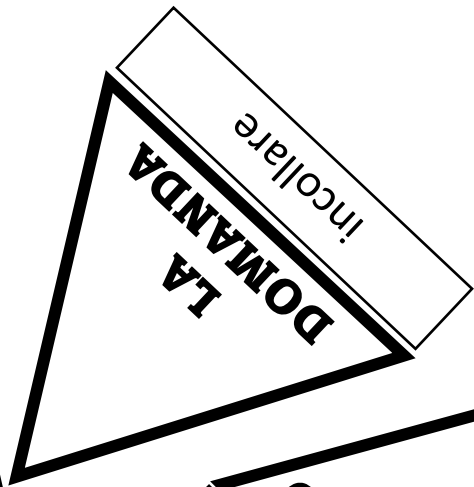
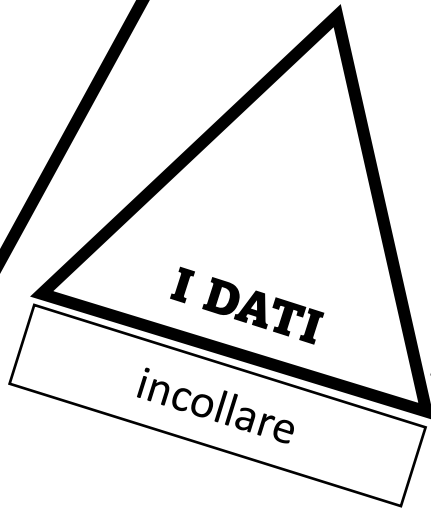

**CON LA
SOTTRAZIONE
...**

**CON
LA
MOLTIPLICAZIONE
...**

**CON
LA
DIVISIONE...**

÷

PAROLE CHIAVE
DIVIDERE, SISTEMARE,
DISPORRE,
DISTRIBUIRE,
RIPARTIRE
NELLA DOMANDA:
CIASCUNO, OGNI,
OGNUNO



**NEL PROBLEMA
SI POSSONO
INDIVIDUARE
MOLTE
INFORMAZIONI...**

**A PROPOSITO
DI DATI...**

A PROPOSITO DI DATI...

DATI UTILI

SONO I DATI
NECESSARI PER
RISOLVERE IL
PROBLEMA.

DATI INUTILI

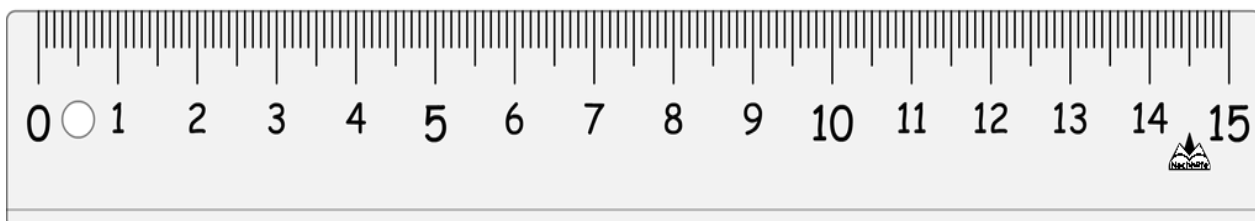
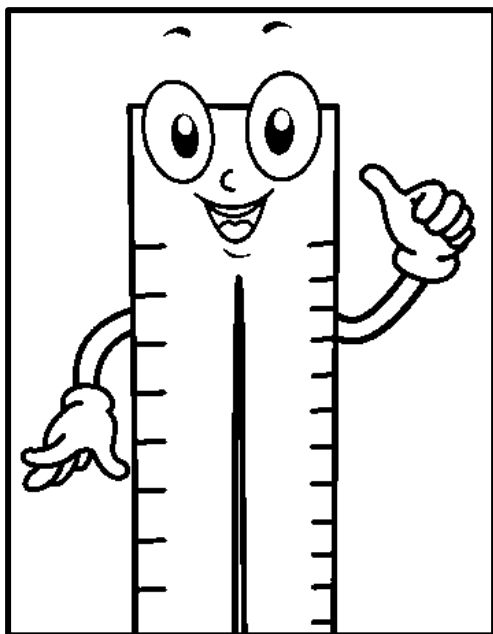
SONO I DATI NON
NECESSARI PER
RISOLVERE IL
PROBLEMA.

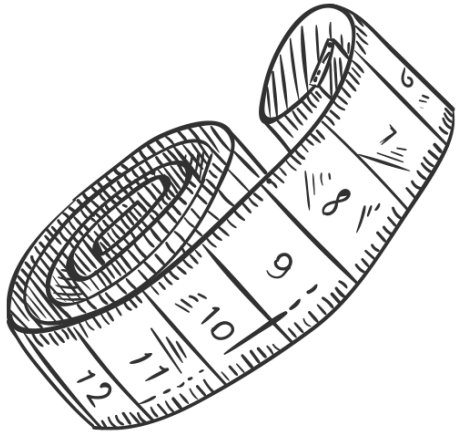
DATI MANCANTI

SONO I DATI NON
PRESENTI NEL TESTO,
QUINDI IL PROBLEMA
NON SI PUO'
RISOLVERE.

DATI NASCOSTI

SONO I DATI CHE
MANCANO, MA CHE
SI POSSONO
TROVARE.

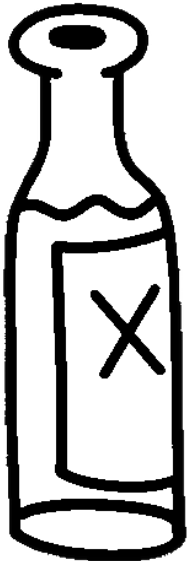




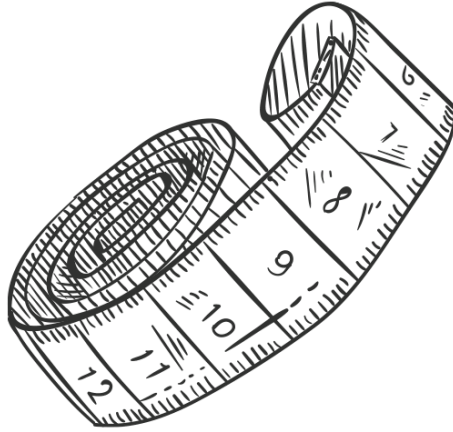
LUNGHEZZE



PESO




CAPACITA'















LUNGHEZZE


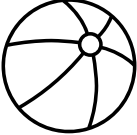


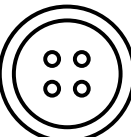


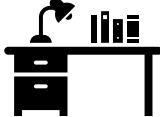





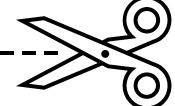


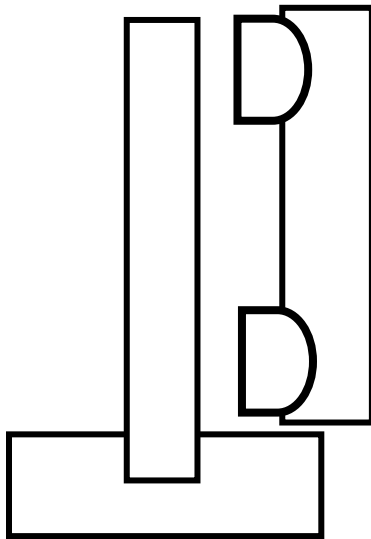
PESO


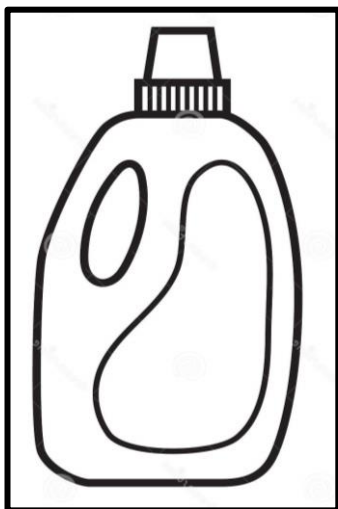
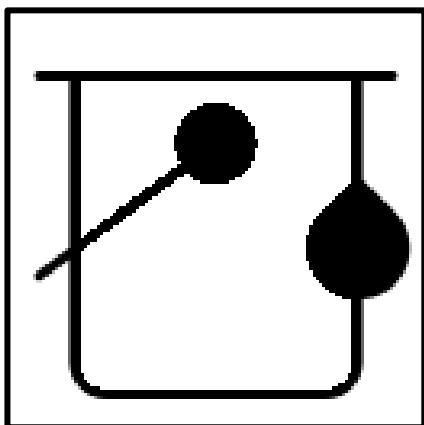
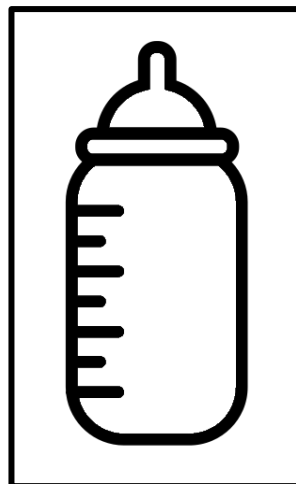

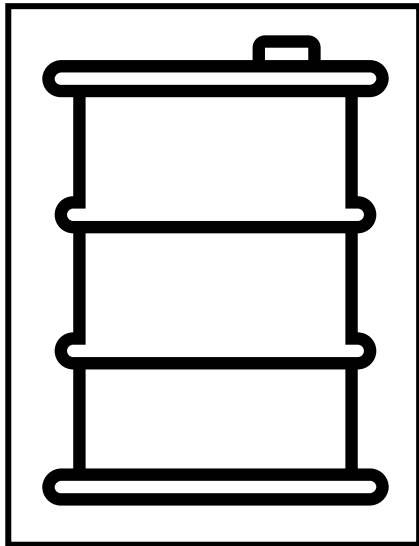


CAPACITA'

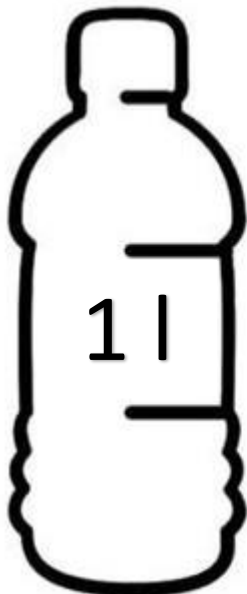
OGGETTO	PIU' LUNGO?	OGGETTO
 <p data-bbox="282 195 396 233">LIBRO</p>		<p data-bbox="829 195 1001 233">ASTUCCIO</p> 
 <p data-bbox="229 401 411 440">CEROTTO</p>		 <p data-bbox="836 411 1043 450">BAGUETTE</p>
 <p data-bbox="247 575 396 614">MATITA</p>		<p data-bbox="822 575 993 614">GOMMA</p> 
 <p data-bbox="172 736 411 774">CARAMELLA</p>		<p data-bbox="822 745 1029 784">TEMPERINO</p> 
 <p data-bbox="251 890 415 929">LAVAGNA</p>		<p data-bbox="865 890 1001 929">BANCO</p> 
 <p data-bbox="251 1064 386 1103">DIARIO</p>		<p data-bbox="829 1045 1029 1083">SALVIETTA</p> 
 <p data-bbox="201 1151 408 1190">BOTTIGLIA</p>		<p data-bbox="829 1151 1029 1190">BICCHIERE</p> 

OGGETTO	COSA PESA DI PU'?	OGGETTO
 CAPPELLO		PALLA 
 CHITARRA		CIAMBELLA 
 BOTTONE		UOVO 
 TAMBURO		SCRIVANIA 
 BOTTIGLIA		PETTINE 
 DOLCE		PIANTA 
 FRULLATORE		FORBICI 

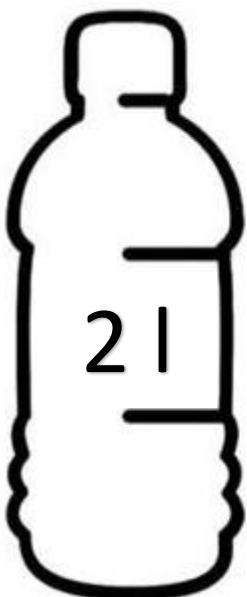






**CONTENITORI
E
CAPACITA'**




CON QUANTI BICCHIERI D'ACQUA SI PUO' RIEMPIRE UNA BOTTIGLIA DA 1 LITRO?



CON QUANTI BICCHIERI D'ACQUA SI PUO' RIEMPIRE UNA BOTTIGLIA DA 2 LITRI?

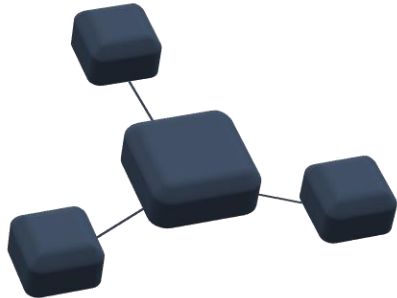




TEMPO




MONETA



RELAZIONI



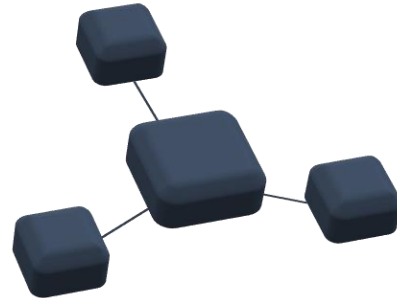
DATI



TEMPO



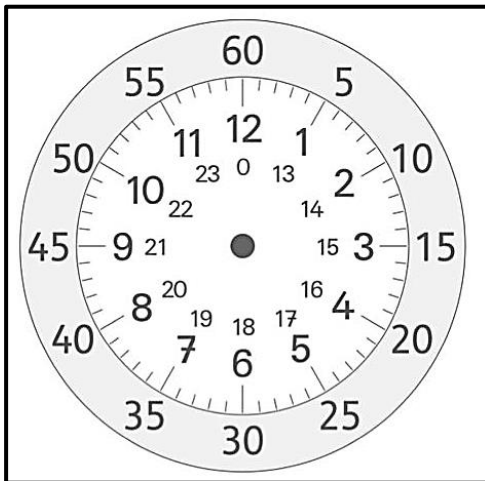

MONETA



RELAZIONI

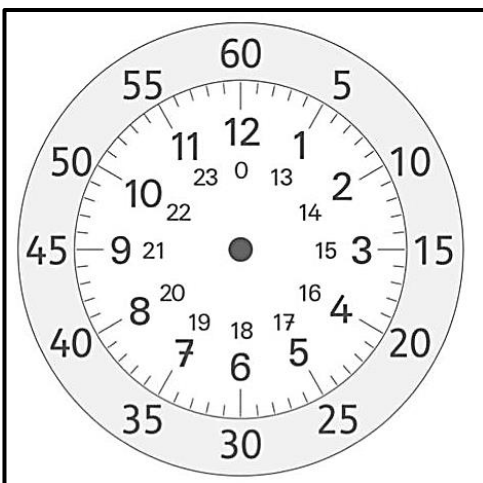



DATI




Da completare con fermacampione e scovolino

1	2	3	4	5	6	7	8	9	10	11	12
5	10	15	20	25	30	35	40	45	50	55	60



1	2	3	4	5	6	7	8	9	10	11	12
5	10	15	20	25	30	35	40	45	50	55	60





15 25 45 35 05 40

30 50 55 00 20 10






BANCONOTE




MONETE

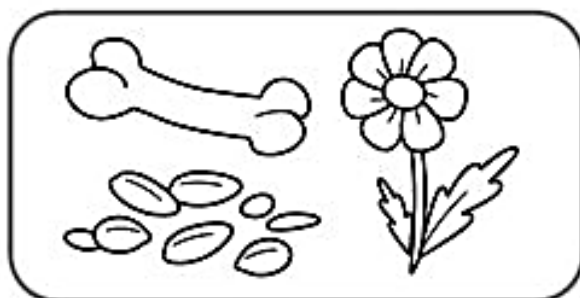





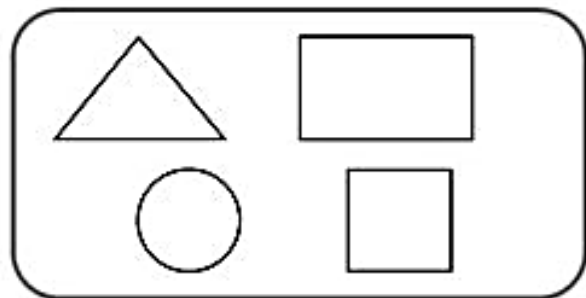
LA FRECCIA SIGNIFICA È LA CASA DI →



LA FRECCIA SIGNIFICA SI NUTRE DI →



LA FRECCIA SIGNIFICA SI CHIAMA →



TRIANGOLO
CERCHIO
QUADRATO
RETTANGOLO

UNISCI AL CARTELLINO ADATTO L'AFFERMAZIONE DI OGNI BAMBINO



Domenica ploverà.

Impossibile



Dopo ogni di viene la notte.

Possibile



Gli asini volano.

Certo

OSSERVA IL SACCO DELLA PESCA A SORPRESA E COMPLETA LE FRASI CON CERTO, POSSIBILE E IMPOSSIBILE. POI RISPONDI



- È _____ che Luca peschi una tromba.
- È _____ che Luca peschi una palla.
- È _____ che Luca peschi un gioco.
- Ci sono più possibilità di pescare una bambola o un aquilone? _____

INDICA SE OGNI AFFERMAZIONE E' C (CERTA), P (POSSIBILE), I (IMPOSSIBILE)

<input type="checkbox"/>
<input type="checkbox"/>
<input type="checkbox"/>
<input type="checkbox"/>

DOPO L'INVERNO VIENE L'ESTATE

IL LEONE E' CARNIVORO

LA MAMMA CUCINERA' LA PASTA

IL TRENO ARRIVERA' IN RITARDO

<input type="checkbox"/>
<input type="checkbox"/>
<input type="checkbox"/>
<input type="checkbox"/>

$2 \times 3 = 6$

NATALE E' IL 25 APRILE

QUESTO INVERNO NEVICHERA'

LO ZUCCHERO E' DOLCE

