
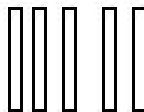





DISEGNA LE CANNUCCE CHE MANCANO PER FORMARE IL NUMERO INDICATO. USA I FASCETTI QUANDO PUOI



11

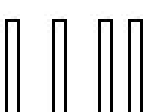

17

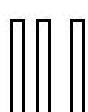

13


10







9


12






16


19

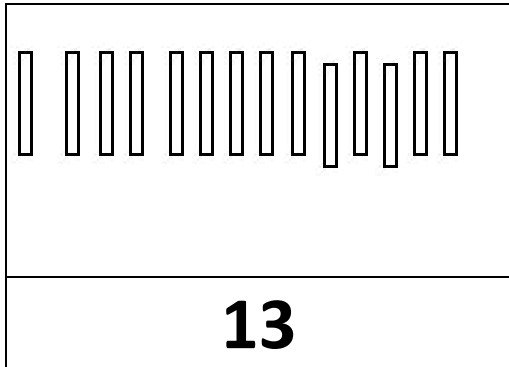
AGGIUNGI I PALLINI CHE MANCANO PER FORMARE IL NUMERO INDICATO

				
12	9	7	10	11

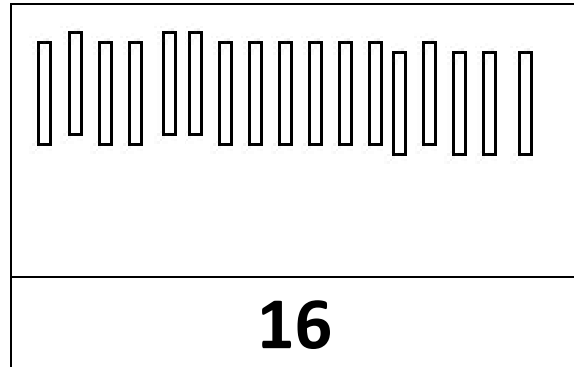
TOGLI I PALLINI IN PIÙ PER FORMARE IL NUMERO INDICATO

			
12	8	11	6

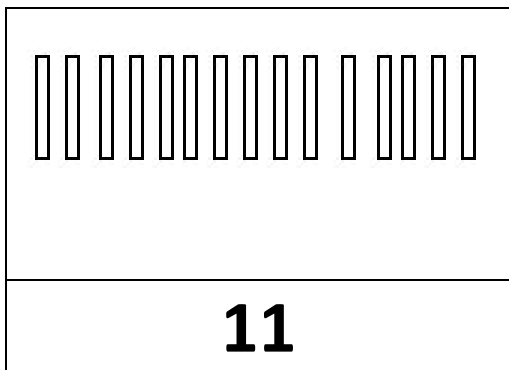
TOGLI LE CANNUCCE IN PIÙ PER FORMARE IL NUMERO INDICATO



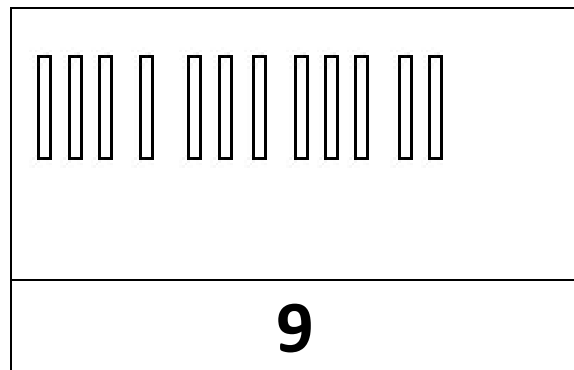
13



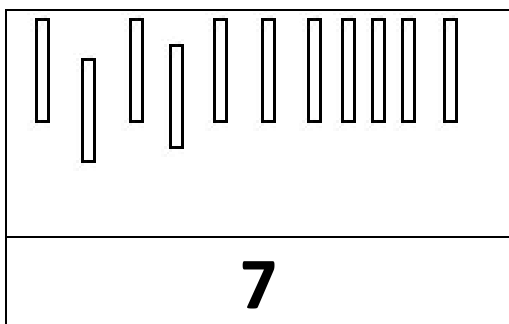
16



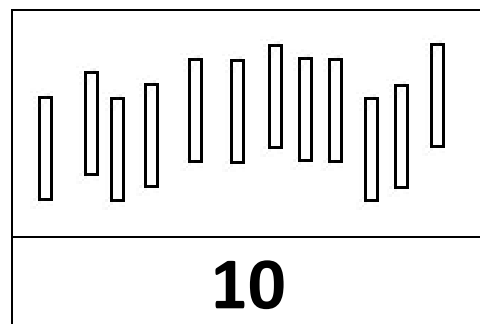
11



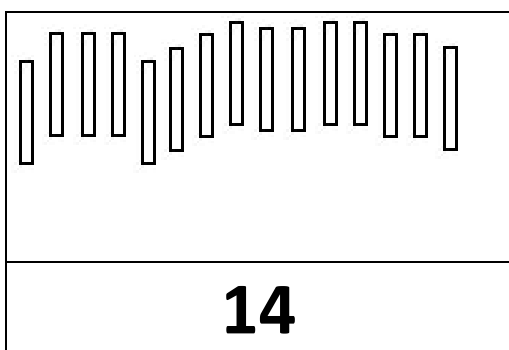
9



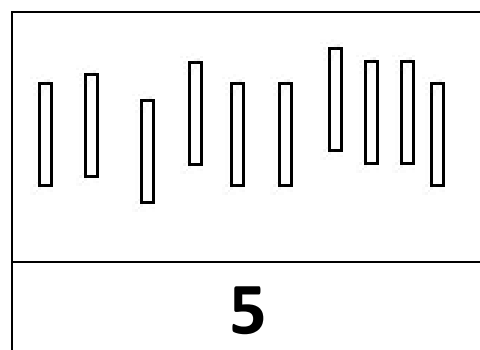
7



10

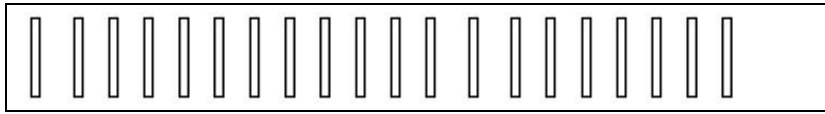


14

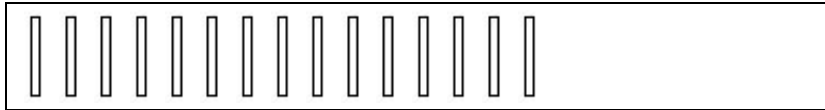


5

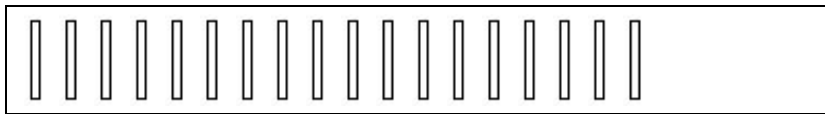
TOGLI LE CANNUCCE IN PIÙ PER CALCOLARE IL RISULTATO



$20 - 4 =$



$15 - 6 =$



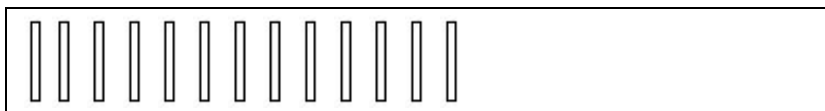
$18 - 11 =$



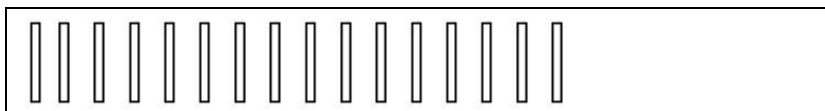
$9 - 6 =$



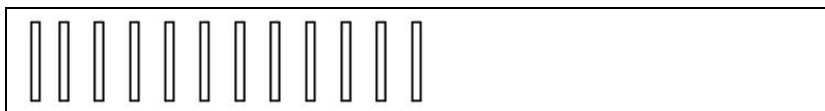
$20 - 11 =$



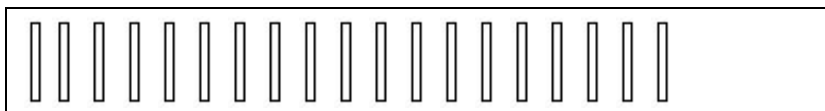
$13 - 4 =$



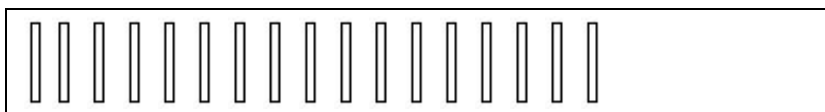
$16 - 5 =$



$12 - 7 =$



$19 - 8 =$



$17 - 8 =$

COMPLETA CON IL RISULTATO DELLE SOTTRAZIONI

○	○	○	○	○	○	○	○	○	○
○	○	○	○	○					

$15 - 9 = \underline{\quad}$

○	○	○	○	○	○				
○	○	○	○	○					

$11 - 8 = \underline{\quad}$

○	○	○	○	○	○	○	○	○	○
○	○	○	○	○	○	○			

$17 - 4 = \underline{\quad}$

○	○	○	○	○	○	○	○	○	○
○	○	○	○	○	○				

$16 - 5 = \underline{\quad}$

○	○	○	○	○	○	○	○	○	○
○	○	○	○	○	○	○	○	○	

$19 - 10 = \underline{\quad}$

○	○	○	○	○	○	○			
○	○	○	○	○					

$13 - 2 = \underline{\quad}$

COMPLETA CON IL NUMERO CHE MANCA

$$\boxed{20} - \boxed{} = \boxed{11}$$

$$\boxed{20} - \boxed{} = \boxed{10}$$

$$\boxed{20} - \boxed{} = \boxed{7}$$

$$\boxed{20} - \boxed{} = \boxed{4}$$

$$\boxed{20} - \boxed{} = \boxed{13}$$

$$\boxed{20} - \boxed{} = \boxed{1}$$

$$\boxed{20} - \boxed{} = \boxed{16}$$

$$\boxed{20} - \boxed{} = \boxed{18}$$

$$\boxed{20} - \boxed{} = \boxed{5}$$

$$\boxed{20} - \boxed{} = \boxed{9}$$

$$\boxed{20} - \boxed{} = \boxed{2}$$

$$\boxed{20} - \boxed{} = \boxed{15}$$

COMPLETA CON IL NUMERO CHE MANCA

$$\boxed{15} + \boxed{} = \boxed{16}$$

$$\boxed{} + \boxed{7} = \boxed{11}$$

$$\boxed{8} + \boxed{} = \boxed{13}$$

$$\boxed{} + \boxed{5} = \boxed{17}$$

$$\boxed{11} + \boxed{} = \boxed{14}$$

$$\boxed{6} + \boxed{} = \boxed{11}$$

$$\boxed{12} - \boxed{} = \boxed{10}$$

$$\boxed{} - \boxed{9} = \boxed{7}$$

$$\boxed{5} - \boxed{} = \boxed{3}$$

$$\boxed{} - \boxed{2} = \boxed{11}$$

SOTTRAZIONI ...BUCATE
COMPLETA CON I NUMERI CHE MANCANO

$$20 - \square = 10$$

$$\square - 16 = 1$$

$$18 - \square = 4$$

$$15 - \square = 7$$

$$\square - 15 = 3$$

$$\square - 3 = 9$$

$$\square - 11 = 6$$

$$\square - 6 = 8$$

$$14 - \square = 7$$

$$\square - 9 = 5$$

$$12 - \square = 6$$